

SA's Leading Past Year

Exam Paper Portal

STUDY

You have Downloaded, yet Another Great Resource to assist you with your Studies 😊

Thank You for Supporting SA Exam Papers

Your Leading Past Year Exam Paper Resource Portal

Visit us @ [www.saexampapers.co.za](http://www.saexampapers.co.za)



SA EXAM  
PAPERS



FOLLOW THESE INSTRUCTIONS CAREFULLY	VOLG HIERDIE INSTRUKSIES NOUKEURIG
1. Clearly write your examination number and centre number in the spaces provided and attach your barcode label in the space provided.	1. Skryf jou eksamennommer en sentrumnummer duidelik in die ruimtes soos verskaf en plak jou stafieskodeplakker in die ruimte soos verskaf.
2. Remember that your own name (or the name of your school) may not appear anywhere on or in this answer book.	2. Onthou dat jou eie naam (of die naam van jou skool) nie op of in hierdie antwoordeboek mag voorkom nie.
3. No pages may be torn from this answer book.	3. Geen bladsye mag uit hierdie antwoordeboek geskeur word nie.
4. Read the instructions printed on your timetable carefully as well as any other instructions which may be given in each examination paper.	4. Lees die instruksies wat op jou eksamenrooster gedruk is, sorgvuldig deur, asook enige ander instruksies wat in elke eksamenvraestel gegee word.
5. Candidates may not retain any answer book or remove them from the examination room.	5. Geen antwoordeboek mag deur die kandidaat behou of uit die eksamenlokaal verwyder word nie.
6. Answers must be written in black/blue ink as distinctly as possible.	6. Skryf die antwoorde so duidelik moontlik met swart/blou.
7. Draw a neat line through any work/rough work that must not be marked.	7. Trek 'n netjiese lyn deur enige werk/rofwerk wat nie nagesien moet word nie.

**QUESTION/VRAAG 1**

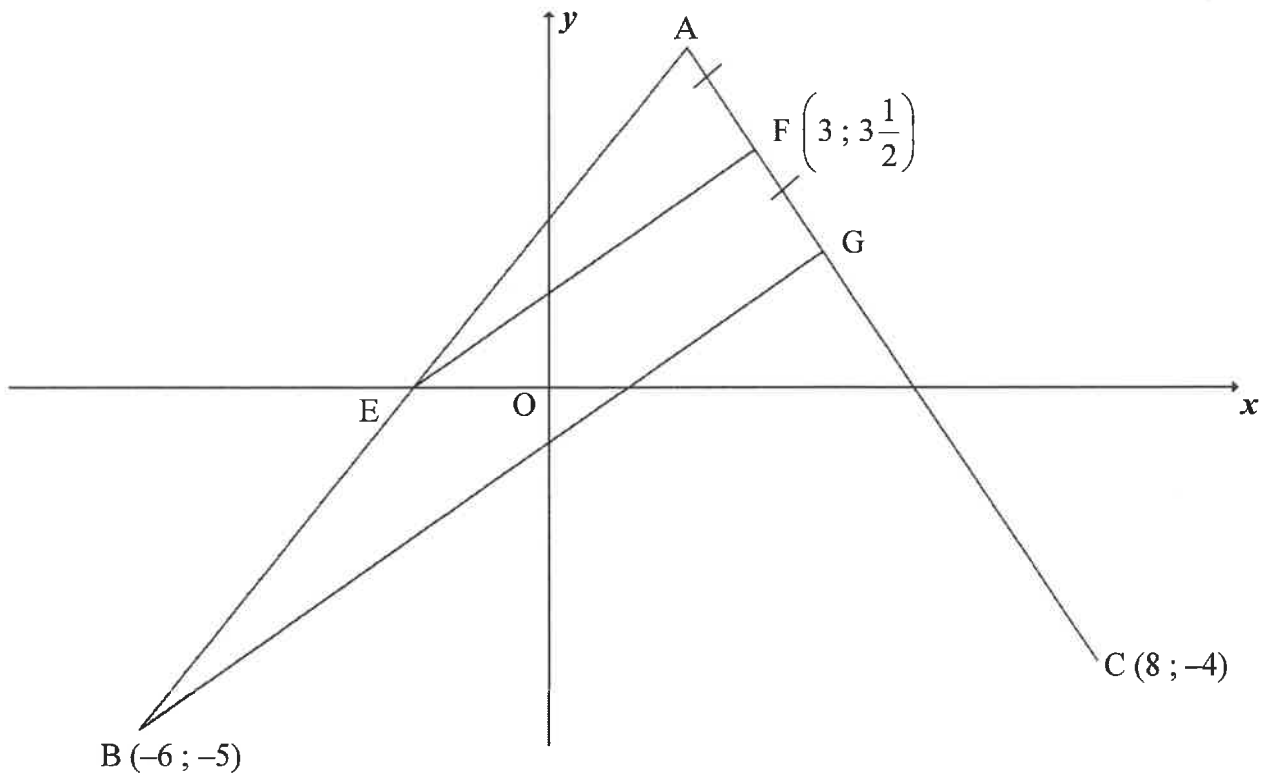
<b>Time for 100 m sprint (in seconds)</b> <i>Tyd vir 100 m-naelloop (in sekondes)</i>	10,1	10,2	10,5	10,9	11	11,1	11,2	11,5	12	12	12,2	12,5
<b>Distance of best long jump (in metres)</b> <i>Afstand van beste sprong in verspring (in meter)</i>	8	7,7	7,6	7,3	7,6	7,2	6,8	7	6,6	6,3	6,8	6,4

	<b>Solution/Oplissing</b>	<b>Marks Punte</b>
1.1		(3)
1.2		(2)
1.3		(2)
		<b>[7]</b>



	<b>Solution/<i>Oplossing</i></b>	<b>Marks <i>Punte</i></b>
2.4.1		(1)
2.4.2		(2)
		<b>[13]</b>

**QUESTION/VRAAG 3**

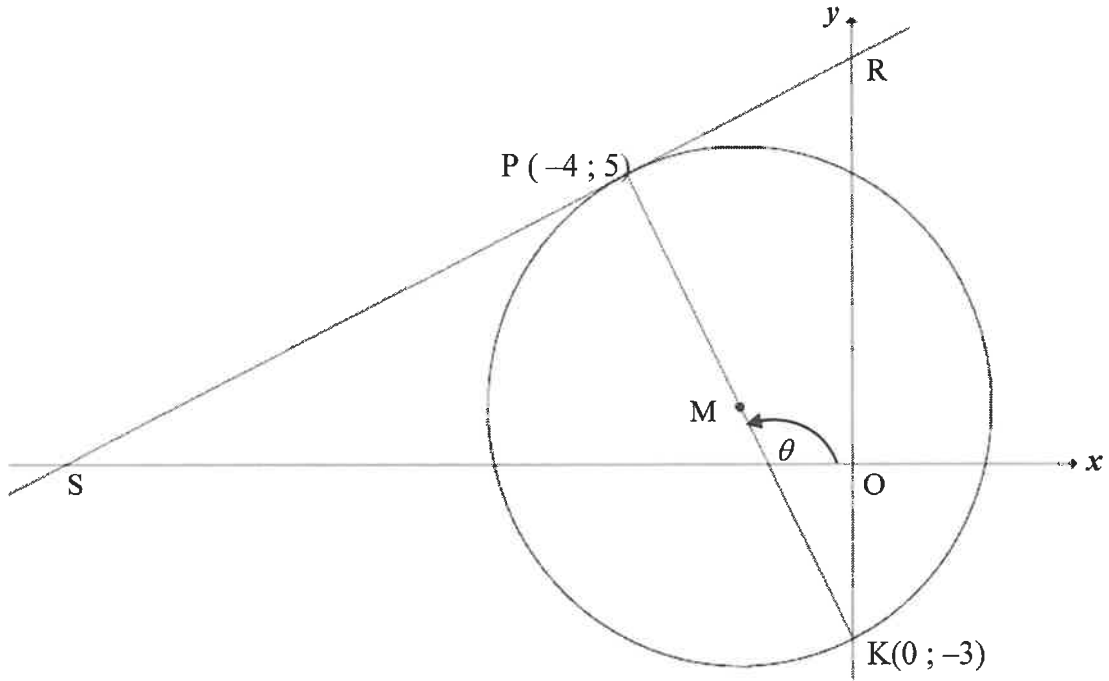


	<b>Solution/Oplissing</b>	<b>Marks Punte</b>
3.1.1		(4)
3.1.2		

	<b>Solution/Oplissing</b>	<b>Marks Punte</b>
3.1.2 (cont./ vervolg)		(3)
3.2		(2)
3.3		(4)
3.4		(4)
		<b>[17]</b>



**QUESTION/VRAAG 4**



	<b>Solution/Oplissing</b>	<b>Marks Punte</b>
4.1.1		(4)
4.1.2		(2)

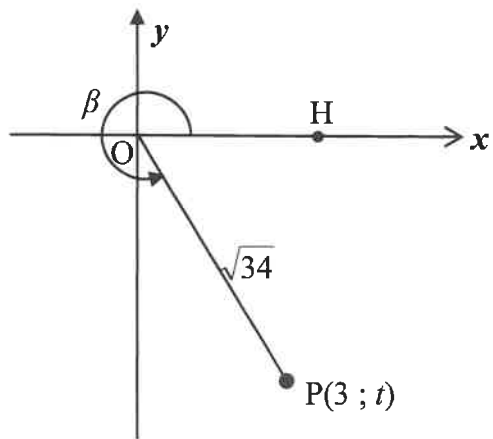
	<b>Solution/<i>Oplossing</i></b>	<b>Marks <i>Punte</i></b>
4.1.3		(4)
4.1.4		(3)
4.1.5		(2)
4.2		(3)



**QUESTION/VRAAG 5**

	<b>Solution/Oplissing</b>	<b>Marks Punte</b>
5.1		(6)

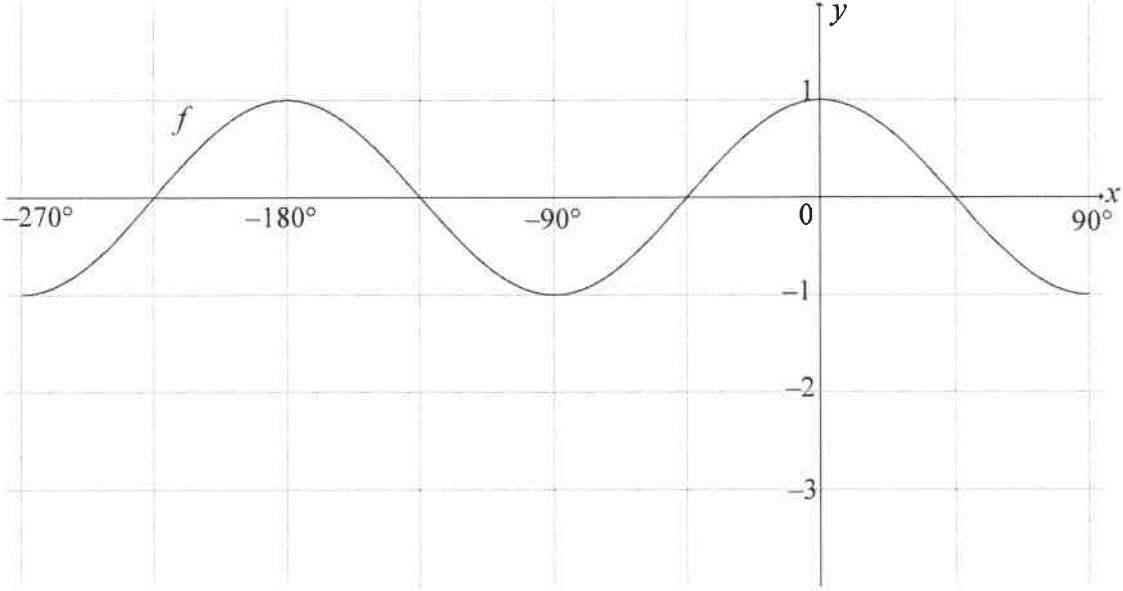
5.2



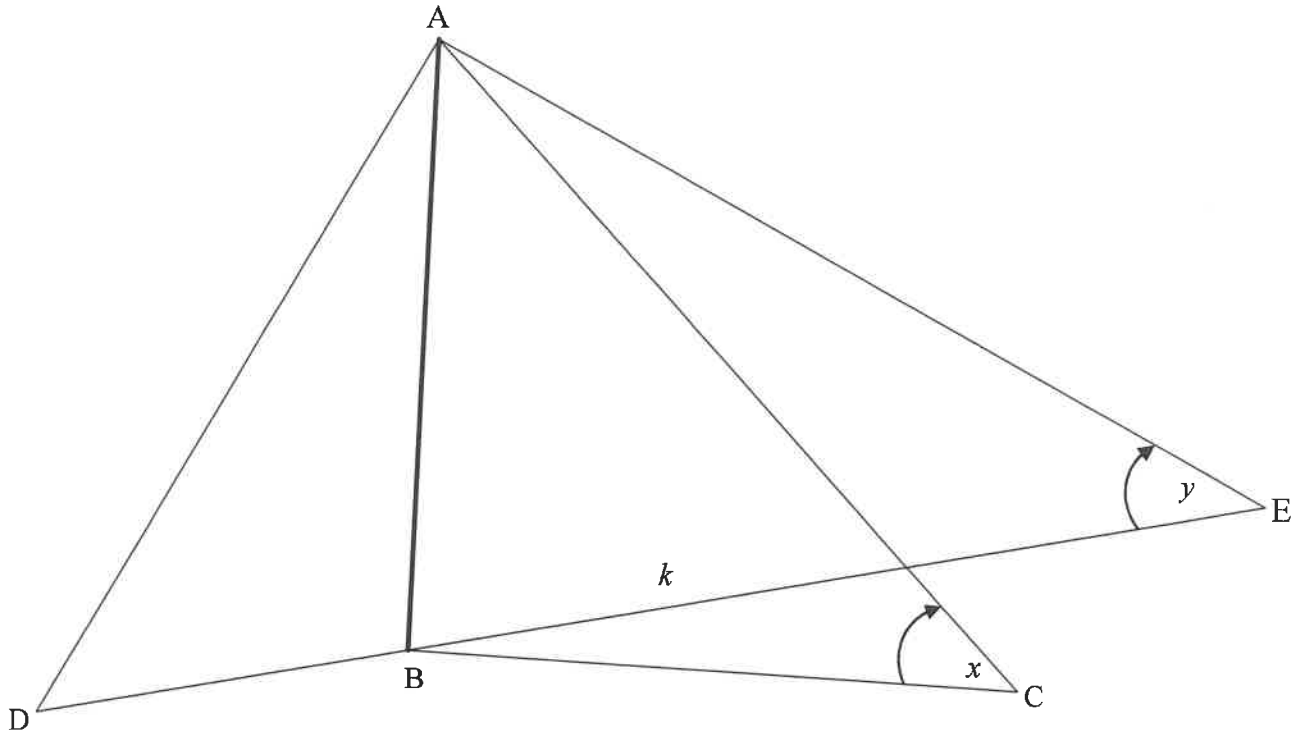
5.2.1		(2)
-------	--	-----

	<b>Solution/<i>Oplossing</i></b>	<b>Marks <i>Punte</i></b>
5.2.2		(1)
5.2.3		(4)
5.3.1		(2)
5.3.2		(4)
		<b>[19]</b>

**QUESTION/VRAAG 6**

	<b>Solution/Oplissing</b>	<b>Marks Punte</b>
6.1		(4)
6.2	<hr/> <hr/> <hr/> <hr/> <hr/> <hr/> <hr/> <hr/> <hr/> <hr/> <hr/> <hr/>	(4)
6.3	<hr/> <hr/> <hr/> <hr/> <hr/> <hr/> <hr/> <hr/> <hr/> <hr/> <hr/> <hr/>	(4) [12]

**QUESTION/VRAAG 7**



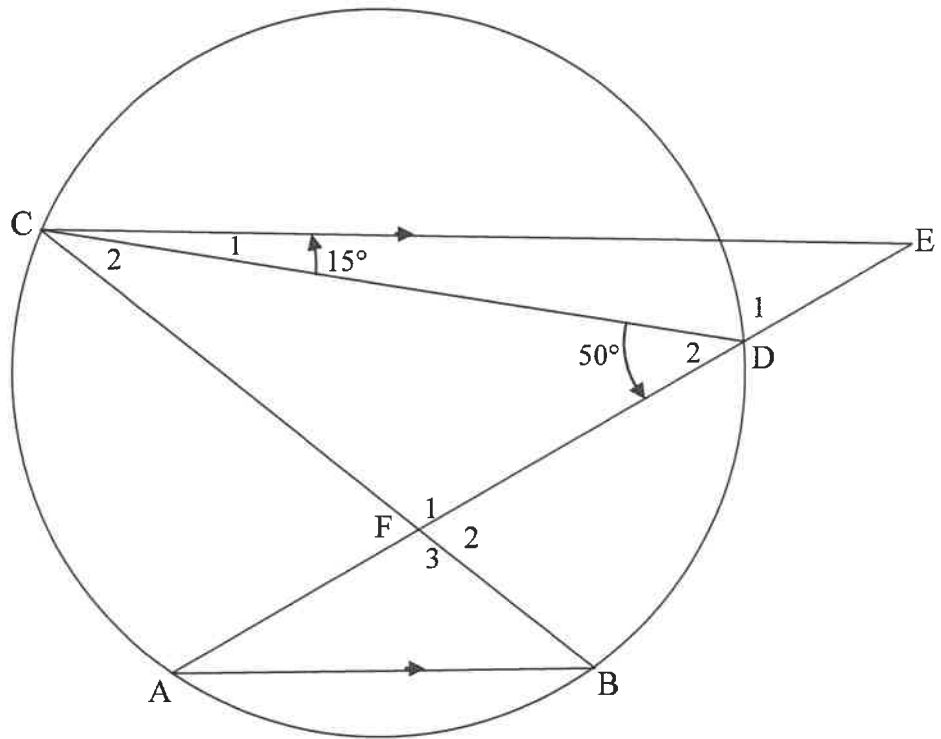
	<b>Solution/Oplissing</b>	<b>Marks Punte</b>
7.1		(1)
7.2		(4)

	<b>Solution/<i>Oplossing</i></b>	<b>Marks <i>Punte</i></b>
7.3		
		(5)
		<b>[10]</b>



Give reasons for your statements in QUESTIONS 8, 9, 10 and 11.  
Gee redes vir jou bewerings in VRAAG 8, 9, 10 en 11.

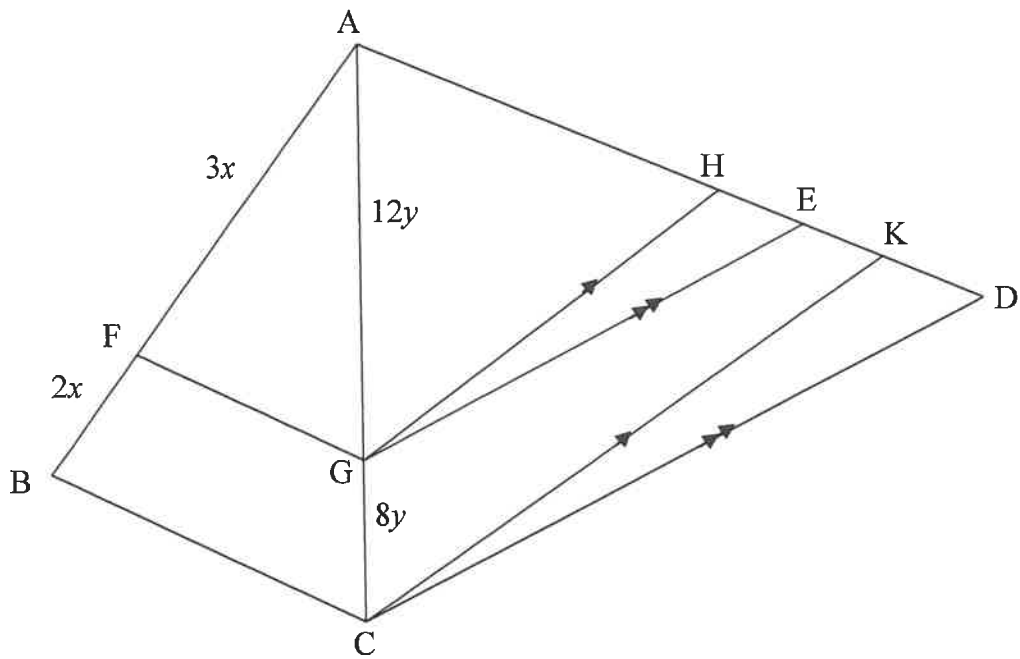
**QUESTION/VRAAG 8**



	<b>Solution/Oplissing</b>	<b>Marks Punte</b>
8.1.1		
		(3)

	<b>Solution/<i>Oplossing</i></b>	<b>Marks <i>Punte</i></b>
8.1.2		(2)
8.2		(2)
		<b>[7]</b>

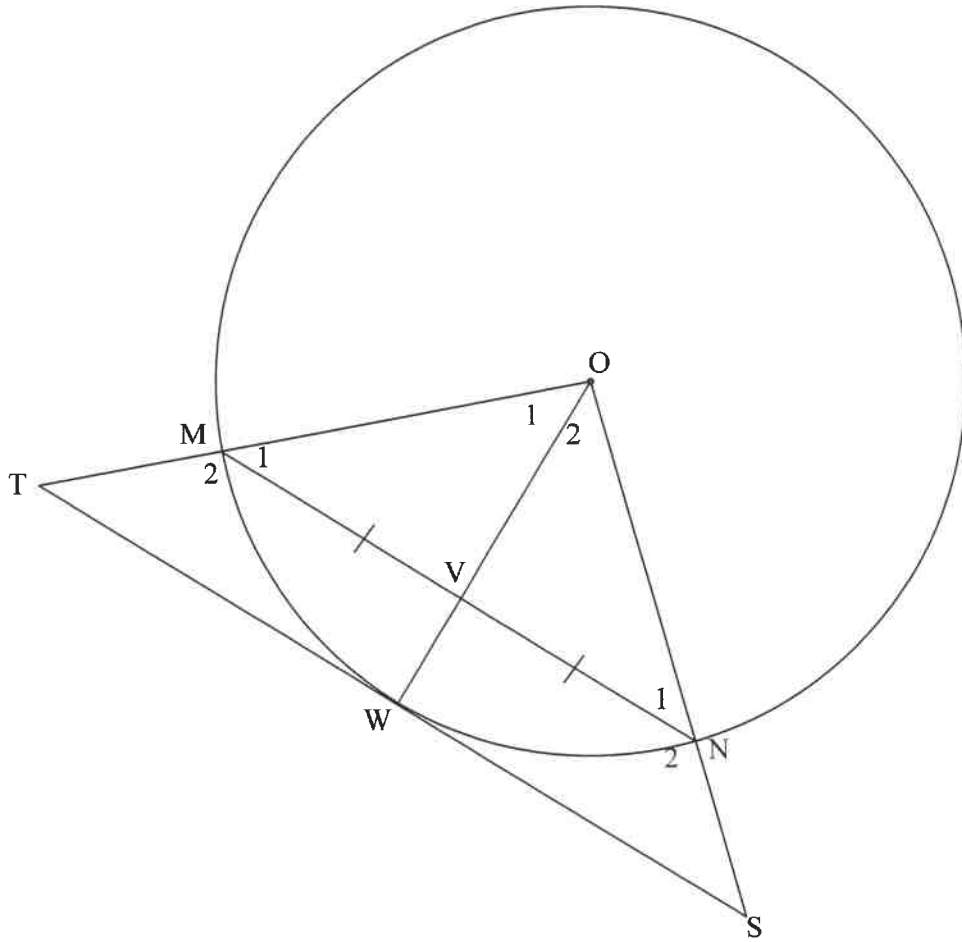
**QUESTION/VRAAG 9**



	<b>Solution/Oplissing</b>	<b>Marks Punte</b>
9.1.1		(2)
9.1.2		(3)

	<b>Solution/<i>Oplissing</i></b>	<b>Marks <i>Punte</i></b>
9.2		
		(5)
		<b>[10]</b>

**QUESTION/VRAAG 10**

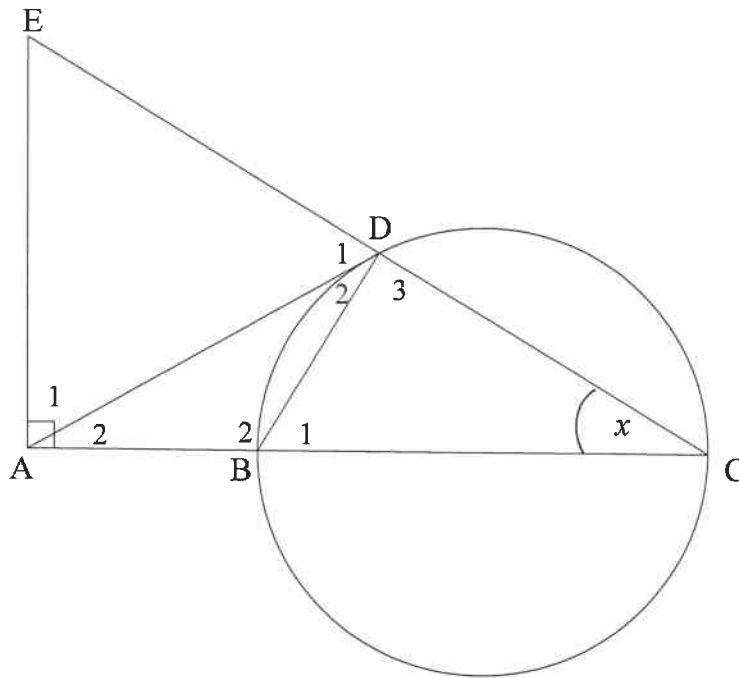


	<b>Solution/Oplissing</b>	<b>Marks Punte</b>
10.1		(1)
10.2.1		(2)

	<b>Solution/Oplossing</b>	<b>Marks Punte</b>
10.2.2	<div style="border-bottom: 1px solid black; height: 15px; margin-bottom: 2px;"></div> <div style="border-bottom: 1px solid black; height: 15px; margin-bottom: 2px;"></div> <div style="border-bottom: 1px solid black; height: 15px; margin-bottom: 2px;"></div> <div style="border-bottom: 1px solid black; height: 15px; margin-bottom: 2px;"></div> <div style="border-bottom: 1px solid black; height: 15px; margin-bottom: 2px;"></div> <div style="border-bottom: 1px solid black; height: 15px; margin-bottom: 2px;"></div> <div style="border-bottom: 1px solid black; height: 15px; margin-bottom: 2px;"></div> <div style="border-bottom: 1px solid black; height: 15px; margin-bottom: 2px;"></div> <div style="border-bottom: 1px solid black; height: 15px; margin-bottom: 2px;"></div> <div style="border-bottom: 1px solid black; height: 15px; margin-bottom: 2px;"></div> <div style="border-bottom: 1px solid black; height: 15px; margin-bottom: 2px;"></div> <div style="border-bottom: 1px solid black; height: 15px; margin-bottom: 2px;"></div> <div style="border-bottom: 1px solid black; height: 15px; margin-bottom: 2px;"></div> <div style="border-bottom: 1px solid black; height: 15px; margin-bottom: 2px;"></div> <div style="border-bottom: 1px solid black; height: 15px; margin-bottom: 2px;"></div> <div style="border-bottom: 1px solid black; height: 15px; margin-bottom: 2px;"></div> <div style="border-bottom: 1px solid black; height: 15px; margin-bottom: 2px;"></div> <div style="border-bottom: 1px solid black; height: 15px; margin-bottom: 2px;"></div> <div style="border-bottom: 1px solid black; height: 15px; margin-bottom: 2px;"></div>	(4)
10.2.3	<div style="border-bottom: 1px solid black; height: 15px; margin-bottom: 2px;"></div> <div style="border-bottom: 1px solid black; height: 15px; margin-bottom: 2px;"></div> <div style="border-bottom: 1px solid black; height: 15px; margin-bottom: 2px;"></div> <div style="border-bottom: 1px solid black; height: 15px; margin-bottom: 2px;"></div> <div style="border-bottom: 1px solid black; height: 15px; margin-bottom: 2px;"></div> <div style="border-bottom: 1px solid black; height: 15px; margin-bottom: 2px;"></div> <div style="border-bottom: 1px solid black; height: 15px; margin-bottom: 2px;"></div> <div style="border-bottom: 1px solid black; height: 15px; margin-bottom: 2px;"></div> <div style="border-bottom: 1px solid black; height: 15px; margin-bottom: 2px;"></div> <div style="border-bottom: 1px solid black; height: 15px; margin-bottom: 2px;"></div> <div style="border-bottom: 1px solid black; height: 15px; margin-bottom: 2px;"></div> <div style="border-bottom: 1px solid black; height: 15px; margin-bottom: 2px;"></div> <div style="border-bottom: 1px solid black; height: 15px; margin-bottom: 2px;"></div> <div style="border-bottom: 1px solid black; height: 15px; margin-bottom: 2px;"></div> <div style="border-bottom: 1px solid black; height: 15px; margin-bottom: 2px;"></div> <div style="border-bottom: 1px solid black; height: 15px; margin-bottom: 2px;"></div> <div style="border-bottom: 1px solid black; height: 15px; margin-bottom: 2px;"></div>	(5)
		<b>[12]</b>

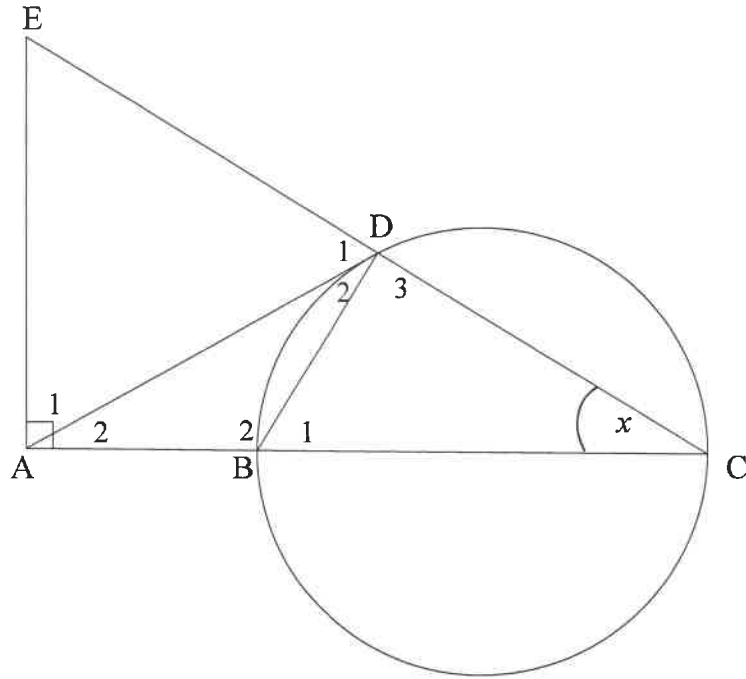


11.2



	<b>Solution/Oplissing</b>	<b>Marks Punte</b>
11.2.1(a)		(1)
11.2.1(b)		(1)
11.2.1(c)		(1)
11.2.2(a)		(3)





	<b>Solution/Oplossing</b>	<b>Marks Punte</b>
11.2.2(b)		
		(3)
11.2.3(a)		
		(2)







