

SA's Leading Past Year

Exam Paper Portal



You have Downloaded, yet Another Great
Resource to assist you with your Studies 😊

Thank You for Supporting SA Exam Papers

Your Leading Past Year Exam Paper Resource Portal

Visit us @ www.saexampapers.co.za



SA EXAM
PAPERS



basic education

Department:
Basic Education
REPUBLIC OF SOUTH AFRICA

NATIONAL SENIOR CERTIFICATE

GRADE 12

PHYSICAL SCIENCES: CHEMISTRY (P2)

FEBRUARY/MARCH 2016

MARKS: 150

TIME: 3 hours

This question paper consists of 15 pages, 4 data sheets and 1 graph sheet.

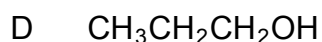
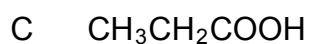
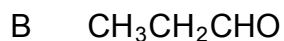
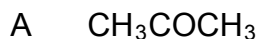
INSTRUCTIONS AND INFORMATION

1. Write your centre number and examination number in the appropriate spaces in the ANSWER BOOK and on the GRAPH SHEET.
2. This question paper consists of TEN questions. Answer QUESTION 5.3.2 on the attached GRAPH SHEET. Answer ALL the questions in the ANSWER BOOK.
3. Start EACH question on a NEW page in the ANSWER BOOK.
4. Number the answers correctly according to the numbering system used in this question paper.
5. Leave ONE line between two subquestions, for example between QUESTION 2.1 and QUESTION 2.2.
6. You may use a non-programmable calculator.
7. You may use appropriate mathematical instruments.
8. You are advised to use the attached DATA SHEETS.
9. Show ALL formulae and substitutions in ALL calculations.
10. Round off your final numerical answers to a minimum of TWO decimal places.
11. Give brief motivations, discussions et cetera where required.
12. Write neatly and legibly.

QUESTION 1: MULTIPLE-CHOICE QUESTIONS

Four options are provided as possible answers to the following questions. Each question has only ONE correct answer. Choose the answer and write only the letter (A–D) next to the question number (1.1–1.10) in the ANSWER BOOK, for example 1.11 E.

1.1 Which ONE of the following compounds is an aldehyde?



(2)

1.2 The equation below represents the decomposition of calcium carbonate.



Which ONE of the following factors will increase the initial rate of decomposition of calcium carbonate?

A Pressure

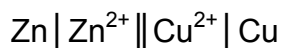
B Temperature

C Concentration

D Mass of $\text{CaCO}_3(\text{s})$

(2)

1.3 Consider the cell notation of the galvanic cell below.



Which ONE of the following statements regarding this cell is TRUE?

A Copper is formed at the cathode.

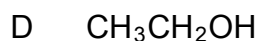
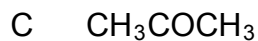
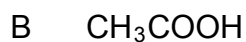
B Copper is formed at the anode.

C Zinc is formed at the anode.

D Zinc is formed at the cathode.

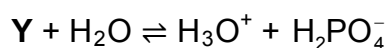
(2)

1.4 Which ONE of the following compounds will react with sodium hydroxide (NaOH) in a neutralisation reaction?

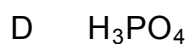
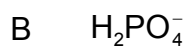


(2)

1.5 Consider the reactant Y in the following reaction:



The formula of Y is:



(2)

1.6 A gardener needs a fertiliser with the highest percentage of the relevant nutrient to obtain a green lawn.

Which ONE of the following NPK fertilisers will give the best results?

A 8 : 1 : 5

B 7 : 1 : 1

C 3 : 2 : 3

D 3 : 1 : 5

(2)

- 1.7 The activation energy for a certain reaction is $50 \text{ kJ}\cdot\text{mol}^{-1}$. Energy is absorbed when this reaction takes place.

Which ONE of the following is CORRECT for the REVERSE reaction?

	ACTIVATION ENERGY (E_A)	HEAT OF REACTION (ΔH)
A	$E_A > 50 \text{ kJ}\cdot\text{mol}^{-1}$	$\Delta H > 0$
B	$E_A > 50 \text{ kJ}\cdot\text{mol}^{-1}$	$\Delta H < 0$
C	$E_A < 50 \text{ kJ}\cdot\text{mol}^{-1}$	$\Delta H < 0$
D	$E_A < 50 \text{ kJ}\cdot\text{mol}^{-1}$	$\Delta H > 0$

(2)

- 1.8 Which ONE of the following pairs of compounds are FUNCTIONAL isomers?

- A Methanol and methanal
- B Butane and 2-methylpropane
- C Propan-1-ol and propan-2-ol
- D Propanoic acid and methyl ethanoate
- (2)

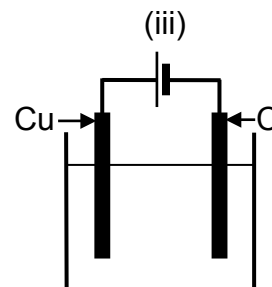
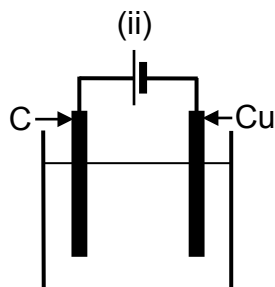
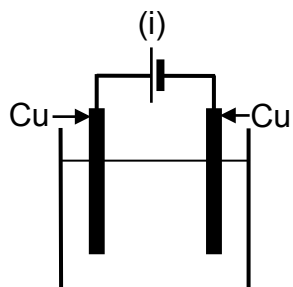
- 1.9 The balanced equations for three reactions at equilibrium in a closed container are given below.

- (i) $\text{C}_2\text{H}_4(\text{g}) + \text{H}_2(\text{g}) \rightleftharpoons \text{C}_2\text{H}_6(\text{g})$
- (ii) $\text{Fe}_3\text{O}_4(\text{s}) + 4\text{H}_2(\text{g}) \rightleftharpoons 3\text{Fe}(\text{s}) + 4\text{H}_2\text{O}(\text{g})$
- (iii) $\text{SO}_3(\text{g}) + \text{NO}(\text{g}) \rightleftharpoons \text{NO}_2(\text{g}) + \text{SO}_2(\text{g})$

In which reaction(s) will the equilibrium position shift when the volume of the reaction vessel is decreased at constant temperature?

- A (i) only
- B (i) and (ii) only
- C (i) and (iii) only
- D (i), (ii) and (iii)
- (2)

- 1.10 In each of the electrolytic cells below, copper(II) sulphate is used as the electrolyte. The electrodes are either carbon (C) or copper (Cu).



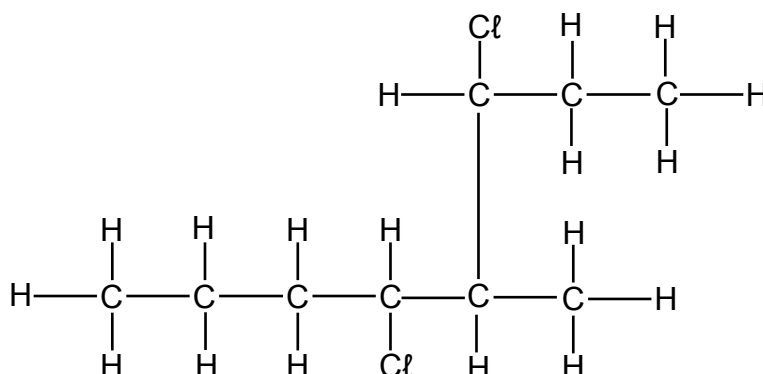
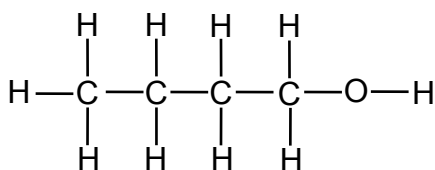
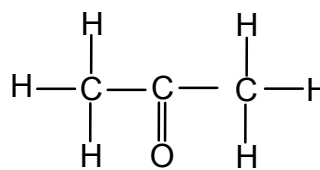
In which cell(s) will the concentration of the electrolyte remain constant during electrolysis?

- A (i) only
B (i) and (ii) only
C (i) and (iii) only
D (ii) and (iii) only

(2)
[20]

QUESTION 2 (Start on a new page.)

2.1 Consider the organic compounds represented by the letters **A** to **C** below.

A**B****C**

Write down the:

2.1.1 Name of the homologous series to which compound **C** belongs (1)

2.1.2 IUPAC name of compound **A** (3)

2.1.3 Structural formula of a tertiary alcohol that is a structural isomer of compound **B** (2)

2.2 An alcohol and methanoic acid are heated in the presence of concentrated sulphuric acid to form an ester.

2.2.1 What is the role of the concentrated sulphuric acid in this reaction? (1)

2.2.2 Write down the NAME or FORMULA of the inorganic product formed. (1)

The ester contains 6,67% hydrogen (H), 40% carbon (C) and 53,33% oxygen (O). The molar mass of the ester is $60 \text{ g} \cdot \text{mol}^{-1}$.

Use a calculation to determine its:

2.2.3 Empirical formula (5)

2.2.4 Molecular formula (3)

Write down the:

2.2.5 Structural formula of methanoic acid (1)

2.2.6 IUPAC name of the ester (2)

[19]

QUESTION 3 (Start on a new page.)

3.1 Define the term *boiling point*. (2)

3.2 What is the relationship between strength of intermolecular forces and boiling point? (1)

The relationship between strength of intermolecular forces and boiling point is investigated using four organic compounds from different homologous series. The compounds and their boiling points are given in the table below.

COMPOUND		BOILING POINT (°C)
A	Propane	-42
B	Propan-2-one	56
C	Propan-1-ol	97
D	Propanoic acid	141

3.3 Refer to the TYPE and the STRENGTH of intermolecular forces to explain the difference in boiling points between:

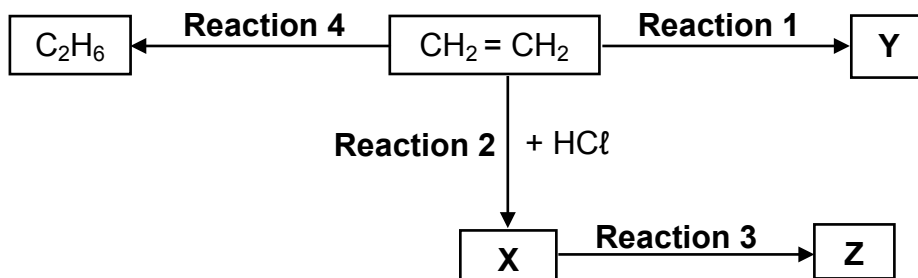
3.3.1 Compounds **A** and **B** (3)

3.3.2 Compounds **C** and **D** (3)

3.4 Is compound **B** a GAS or a LIQUID at room temperature? (1)
[10]

QUESTION 4 (Start on a new page.)

The flow diagram below shows different organic reactions using $\text{CH}_2 = \text{CH}_2$ as the starting reactant. **X**, **Y** and **Z** represent different organic compounds.



- 4.1 During **Reaction 1**, $\text{CH}_2 = \text{CH}_2$ undergoes polymerisation to form compound **Y**.

For this reaction, write down the:

- 4.1.1 Type of polymerisation (1)
- 4.1.2 NAME of compound **Y** (1)

- 4.2 For **Reaction 2**, write down the:

- 4.2.1 IUPAC name of compound **X** (2)
- 4.2.2 Type of addition reaction of which this is an example (1)

- 4.3 During **Reaction 3**, compound **X** reacts with excess hot water.

Write down the:

- 4.3.1 STRUCTURAL FORMULA of compound **Z** (2)
- 4.3.2 NAME or FORMULA of the INORGANIC product (1)

- 4.4 **Reaction 4** is an addition reaction.

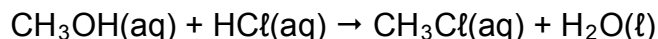
- 4.4.1 Is C_2H_6 a SATURATED or an UNSATURATED compound? Give a reason for the answer. (2)
- 4.4.2 Write down the NAME or FORMULA of the INORGANIC reactant needed for this reaction. (1)
- 4.4.3 Using molecular formulae, write down a balanced equation for the complete combustion of C_2H_6 . (3)

[14]

QUESTION 5 (Start on a new page.)

NOTE: The graph for QUESTION 5.3.2 must be drawn on the GRAPH SHEET attached at the end of the QUESTION PAPER.

Methanol and hydrochloric acid react according to the following balanced equation:



5.1 State TWO factors that can INCREASE the rate of this reaction. (2)

5.2 Define the term *reaction rate*. (2)

5.3 The rate of the reaction between methanol and hydrochloric acid is investigated. The concentration of $\text{HCl}(\text{aq})$ was measured at different time intervals. The following results were obtained:

TIME (MINUTES)	HCl CONCENTRATION ($\text{mol}\cdot\text{dm}^{-3}$)
0	1,90
15	1,45
55	1,10
100	0,85
215	0,60

5.3.1 Calculate the average reaction rate, in $(\text{mol}\cdot\text{dm}^{-3})\cdot\text{min}^{-1}$ during the first 15 minutes. (3)

5.3.2 Use the data in the table to draw a graph of concentration versus time on the attached GRAPH SHEET.
NOTE: The graph is not a straight line.
 (ATTACH THIS GRAPH SHEET TO YOUR ANSWER BOOK.) (3)

5.3.3 From the graph, determine the concentration of $\text{HCl}(\text{aq})$ at the 40th minute. (1)

5.3.4 Use the collision theory to explain why the reaction rate decreases with time. Assume that the temperature remains constant. (3)

5.3.5 Calculate the mass of $\text{CH}_3\text{Cl}(\text{aq})$ in the flask at the 215th minute. The volume of the reagents remains 60 cm^3 during the reaction. (5)
[19]

QUESTION 6 (Start on a new page.)

Initially, 2,2 g of pure $\text{CO}_2(\text{g})$ is sealed in an empty 5 dm^3 container at 900°C .

6.1 Calculate the initial concentration of $\text{CO}_2(\text{g})$. (4)

6.2 Give a reason why equilibrium will not be established. (1)

$\text{CaCO}_3(\text{s})$ is now added to the 2,2 g $\text{CO}_2(\text{g})$ in the container and after a while equilibrium is established at 900°C according to the following balanced equation:



The equilibrium constant for this reaction at 900°C is 0,0108.

6.3 Give a reason why this reaction will only reach equilibrium in a SEALED container. (1)

6.4 Calculate the minimum mass of $\text{CaCO}_3(\text{s})$ that must be added to the container to achieve equilibrium. (7)

6.5 How will EACH of the following changes affect the amount of $\text{CO}_2(\text{g})$? Write down only INCREASES, DECREASES or REMAINS THE SAME.

6.5.1 More $\text{CaCO}_3(\text{s})$ is added at 900°C (1)

6.5.2 The pressure is increased (1)

6.6 It is found that the equilibrium constant (K_c) for this reaction is $2,6 \times 10^{-6}$ at 727°C . Is the reaction EXOTHERMIC or ENDOTHERMIC? Fully explain how you arrived at the answer. (4)
[19]

QUESTION 7 (Start on a new page.)

- 7.1 Define an *acid* in terms of the Lowry-Brønsted theory. (2)
- 7.2 Carbonated water is an aqueous solution of carbonic acid, H_2CO_3 . $\text{H}_2\text{CO}_3(\text{aq})$ ionises in two steps when it dissolves in water.
- 7.2.1 Write down the FORMULA of the conjugate base of $\text{H}_2\text{CO}_3(\text{aq})$. (1)
- 7.2.2 Write down a balanced equation for the first step in the ionisation of carbonic acid. (3)
- 7.2.3 The pH of a carbonic acid solution at 25°C is 3,4. Calculate the hydroxide ion concentration in the solution. (5)
- 7.3 **X** is a monoprotic acid.
- 7.3.1 State the meaning of the term *monoprotic*. (1)
- 7.3.2 A sample of acid **X** is titrated with a standard sodium hydroxide solution using a suitable indicator.
- At the endpoint it is found that 25 cm^3 of acid **X** is neutralised by $27,5\text{ cm}^3$ of the sodium hydroxide solution of concentration $0,1\text{ mol}\cdot\text{dm}^{-3}$.
- Calculate the concentration of acid **X**. (5)
- 7.3.3 The concentration of H_3O^+ ions in the sample of acid **X** is $2,4 \times 10^{-4}\text{ mol}\cdot\text{dm}^{-3}$.
- Is acid **X** a WEAK or a STRONG acid? Explain the answer by referring to the answer in QUESTION 7.3.2. (3)
- [20]**

QUESTION 8 (Start on a new page.)

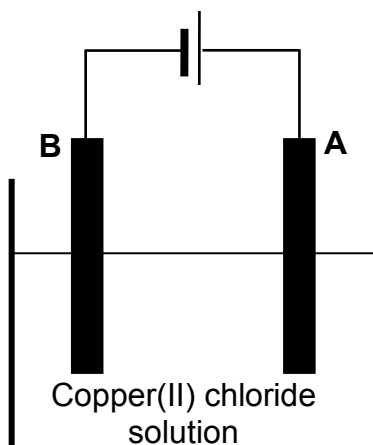
An electrochemical cell consisting of half-cells **A** and **B** is assembled under standard conditions as shown below.

Half-cell A	Pt, Cl ₂ (101,3 kPa) Cl ⁻ (1 mol·dm ⁻³)
Half-cell B	Mg ²⁺ (1 mol·dm ⁻³) Mg(s)

- 8.1 At which half-cell, **A** or **B**, are electrons released into the external circuit? (1)
- 8.2 Write down the:
- 8.2.1 Reduction half-reaction that takes place in this cell (2)
- 8.2.2 NAME or FORMULA of the substance whose oxidation number DECREASES (1)
- 8.3 Calculate the initial cell potential of this cell when it is in operation. (4)
- 8.4 Write down an observation that will be made in half-cell **B** as the cell operates. Give a reason for the answer. (2)
- [10]**

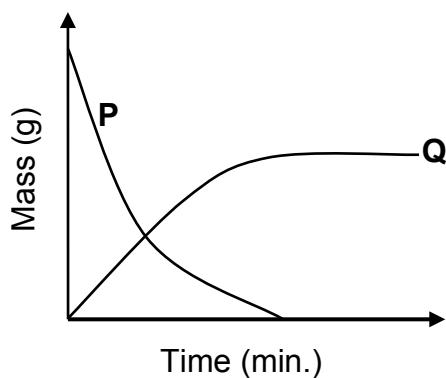
QUESTION 9 (Start on a new page.)

The electrochemical cell below is set up to demonstrate the purification of copper.



- 9.1 Write down the type of electrochemical cell illustrated above. (1)

The graphs below show the change in mass of the electrodes whilst the cell is in operation.



- 9.2 Define a *reducing agent* in terms of electron transfer. (2)
- 9.3 Which graph represents the change in mass of electrode **A**? (1)
- 9.4 Write down the half-reaction that takes place at electrode **A**. (2)
- 9.5 Electrodes **A** and **B** are now replaced by graphite electrodes. It is observed that chlorine gas (Cl_2) is released at one of the electrodes.

At which electrode (**A** or **B**) is chlorine gas formed? Fully explain how it is formed.

(3)
[9]

QUESTION 10 (Start on a new page.)

Ammonium nitrate is an important fertiliser. It is produced by reacting nitric acid with ammonia. Both nitric acid and ammonia are prepared on a large scale in industry.

- 10.1 Write down the name of the industrial preparation of nitric acid. (1)
- 10.2 The catalytic oxidation of ammonia is one of the steps in the process named in QUESTION 10.1.

Write down the NAMES or FORMULAE of the TWO products formed in this step. (2)
- 10.3 Write down a balanced equation for the preparation of ammonium nitrate. (3)
- 10.4 Calculate the mass, in kilogram, of ammonium nitrate that can be made from $6,8 \times 10^4$ kg of ammonia and excess nitric acid.
(One mole of ammonia produces one mole of ammonium nitrate.) (3)
- 10.5 Ammonium nitrate is often mixed with potassium chloride and ammonium phosphate. Give a reason why it is mixed with these compounds. (1)
- [10]**

TOTAL: 150

**DATA FOR PHYSICAL SCIENCES GRADE 12
PAPER 2 (CHEMISTRY)**

**GEGEWENS VIR FISIESE WETENSKAPPE GRAAD 12
VRAESTEL 2 (CHEMIE)**

TABLE 1: PHYSICAL CONSTANTS/TABEL 1: FISIESE KONSTANTES

NAME/NAAM	SYMBOL/SIMBOOL	VALUE/WAARDE
Standard pressure <i>Standaarddruk</i>	p^θ	$1,013 \times 10^5 \text{ Pa}$
Molar gas volume at STP <i>Molêre gasvolume by STD</i>	V_m	$22,4 \text{ dm}^3 \cdot \text{mol}^{-1}$
Standard temperature <i>Standaardtemperatuur</i>	T^θ	273 K
Charge on electron <i>Lading op elektron</i>	e	$-1,6 \times 10^{-19} \text{ C}$
Avogadro's constant <i>Avogadro-konstante</i>	N_A	$6,02 \times 10^{23} \text{ mol}^{-1}$

TABLE 2: FORMULAE/TABEL 2: FORMULES

$n = \frac{m}{M}$	$n = \frac{N}{N_A}$
$c = \frac{n}{V}$ or/of $c = \frac{m}{MV}$	$n = \frac{V}{V_m}$
$\frac{c_a v_a}{c_b v_b} = \frac{n_a}{n_b}$	$\text{pH} = -\log[\text{H}_3\text{O}^+]$
$K_w = [\text{H}_3\text{O}^+][\text{OH}^-] = 1 \times 10^{-14} \text{ at/by } 298 \text{ K}$	
$E_{\text{cell}}^\theta = E_{\text{cathode}}^\theta - E_{\text{anode}}^\theta / E_{\text{sel}}^\theta = E_{\text{katode}}^\theta - E_{\text{anode}}^\theta$ or/of $E_{\text{cell}}^\theta = E_{\text{reduction}}^\theta - E_{\text{oxidation}}^\theta / E_{\text{sel}}^\theta = E_{\text{reduksie}}^\theta - E_{\text{oksidasie}}^\theta$ or/of $E_{\text{cell}}^\theta = E_{\text{oxidising agent}}^\theta - E_{\text{reducing agent}}^\theta / E_{\text{sel}}^\theta = E_{\text{oksideermiddel}}^\theta - E_{\text{reduseermiddel}}^\theta$	

NSC

TABLE 3: THE PERIODIC TABLE OF ELEMENTS
TABEL 3: DIE PERIODIEKE TABEL VAN ELEMENTE

1 (I)	2 (II)	3	4	5	6	7	8	9	10	11	12	13 (III)	14 (IV)	15 (V)	16 (VI)	17 (VII)	18 (VIII)
1 2,1 H 1																	2 He 4
3 1,0 Li 7	4 1,5 Be 9																
11 0,9 Na 23	12 1,2 Mg 24																
19 0,8 K 39	20 1,0 Ca 40	21 1,3 Sc 45	22 1,5 Ti 48	23 1,6 V 51	24 1,6 Cr 52	25 1,5 Mn 55	26 1,8 Fe 56	27 1,8 Co 59	28 1,8 Ni 59	29 1,9 Cu 63,5	30 1,6 Zn 65	31 1,6 Ga 70	32 1,8 Ge 73	33 2,0 As 75	34 2,4 Se 79	35 2,8 Br 80	36 Kr 84
37 0,8 Rb 86	38 1,0 Sr 88	39 1,2 Y 89	40 1,4 Zr 91	41 Nb 92	42 1,8 Mo 96	43 1,9 Tc	44 2,2 Ru 101	45 2,2 Rh 103	46 2,2 Pd 106	47 1,9 Ag 108	48 1,7 Cd 112	49 1,7 In 115	50 1,8 Sn 119	51 1,9 Sb 122	52 2,1 Te 128	53 2,5 I 127	54 Xe 131
55 0,7 Cs 133	56 0,9 Ba 137	57 La 139	72 1,6 Hf 179	73 Ta 181	74 W 184	75 Re 186	76 Os 190	77 Ir 192	78 Pt 195	79 Au 197	80 Hg 201	81 1,8 Tl 204	82 1,8 Pb 207	83 1,9 Bi 209	84 2,0 Po	85 2,5 At	86 Rn
87 0,7 Fr	88 0,9 Ra 226	89 Ac															
			58 Ce 140	59 Pr 141	60 Nd 144	61 Pm	62 Sm 150	63 Eu 152	64 Gd 157	65 Tb 159	66 Dy 163	67 Ho 165	68 Er 167	69 Tm 169	70 Yb 173	71 Lu 175	
			90 Th 232	91 Pa	92 U 238	93 Np	94 Pu	95 Am	96 Cm	97 Bk	98 Cf	99 Es	100 Fm	101 Md	102 No	103 Lr	

KEY/SLEUTEL

Atomic number
*Atoomgetal*Electronegativity
*Elektronegatiwiteit*Symbol
*Simbool*Approximate relative atomic mass
Benaderde relatiewe atoommassa

NSC

TABLE 4A: STANDARD REDUCTION POTENTIALS
TABEL 4A: STANDAARD-REDUKSIEPOTENSIALE

Half-reactions/ <i>Halfreaksies</i>	E° (V)
$F_2(g) + 2e^- \rightleftharpoons 2F^-$	+ 2,87
$Co^{3+} + e^- \rightleftharpoons Co^{2+}$	+ 1,81
$H_2O_2 + 2H^+ + 2e^- \rightleftharpoons 2H_2O$	+1,77
$MnO_4^- + 8H^+ + 5e^- \rightleftharpoons Mn^{2+} + 4H_2O$	+ 1,51
$Cl_2(g) + 2e^- \rightleftharpoons 2Cl^-$	+ 1,36
$Cr_2O_7^{2-} + 14H^+ + 6e^- \rightleftharpoons 2Cr^{3+} + 7H_2O$	+ 1,33
$O_2(g) + 4H^+ + 4e^- \rightleftharpoons 2H_2O$	+ 1,23
$MnO_2 + 4H^+ + 2e^- \rightleftharpoons Mn^{2+} + 2H_2O$	+ 1,23
$Pt^{2+} + 2e^- \rightleftharpoons Pt$	+ 1,20
$Br_2(l) + 2e^- \rightleftharpoons 2Br^-$	+ 1,07
$NO_3^- + 4H^+ + 3e^- \rightleftharpoons NO(g) + 2H_2O$	+ 0,96
$Hg^{2+} + 2e^- \rightleftharpoons Hg(l)$	+ 0,85
$Ag^+ + e^- \rightleftharpoons Ag$	+ 0,80
$NO_3^- + 2H^+ + e^- \rightleftharpoons NO_2(g) + H_2O$	+ 0,80
$Fe^{3+} + e^- \rightleftharpoons Fe^{2+}$	+ 0,77
$O_2(g) + 2H^+ + 2e^- \rightleftharpoons H_2O_2$	+ 0,68
$I_2 + 2e^- \rightleftharpoons 2I^-$	+ 0,54
$Cu^+ + e^- \rightleftharpoons Cu$	+ 0,52
$SO_2 + 4H^+ + 4e^- \rightleftharpoons S + 2H_2O$	+ 0,45
$2H_2O + O_2 + 4e^- \rightleftharpoons 4OH^-$	+ 0,40
$Cu^{2+} + 2e^- \rightleftharpoons Cu$	+ 0,34
$SO_4^{2-} + 4H^+ + 2e^- \rightleftharpoons SO_2(g) + 2H_2O$	+ 0,17
$Cu^{2+} + e^- \rightleftharpoons Cu^+$	+ 0,16
$Sn^{4+} + 2e^- \rightleftharpoons Sn^{2+}$	+ 0,15
$S + 2H^+ + 2e^- \rightleftharpoons H_2S(g)$	+ 0,14
$2H^+ + 2e^- \rightleftharpoons H_2(g)$	0,00
$Fe^{3+} + 3e^- \rightleftharpoons Fe$	– 0,06
$Pb^{2+} + 2e^- \rightleftharpoons Pb$	– 0,13
$Sn^{2+} + 2e^- \rightleftharpoons Sn$	– 0,14
$Ni^{2+} + 2e^- \rightleftharpoons Ni$	– 0,27
$Co^{2+} + 2e^- \rightleftharpoons Co$	– 0,28
$Cd^{2+} + 2e^- \rightleftharpoons Cd$	– 0,40
$Cr^{3+} + e^- \rightleftharpoons Cr^{2+}$	– 0,41
$Fe^{2+} + 2e^- \rightleftharpoons Fe$	– 0,44
$Cr^{3+} + 3e^- \rightleftharpoons Cr$	– 0,74
$Zn^{2+} + 2e^- \rightleftharpoons Zn$	– 0,76
$2H_2O + 2e^- \rightleftharpoons H_2(g) + 2OH^-$	– 0,83
$Cr^{2+} + 2e^- \rightleftharpoons Cr$	– 0,91
$Mn^{2+} + 2e^- \rightleftharpoons Mn$	– 1,18
$Al^{3+} + 3e^- \rightleftharpoons Al$	– 1,66
$Mg^{2+} + 2e^- \rightleftharpoons Mg$	– 2,36
$Na^+ + e^- \rightleftharpoons Na$	– 2,71
$Ca^{2+} + 2e^- \rightleftharpoons Ca$	– 2,87
$Sr^{2+} + 2e^- \rightleftharpoons Sr$	– 2,89
$Ba^{2+} + 2e^- \rightleftharpoons Ba$	– 2,90
$Cs^+ + e^- \rightleftharpoons Cs$	– 2,92
$K^+ + e^- \rightleftharpoons K$	– 2,93
$Li^+ + e^- \rightleftharpoons Li$	– 3,05

Increasing oxidising ability/*Toenemende oksiderende vermoë*

Increasing reducing ability/*Toenemende reduserende vermoë*

NSC

TABLE 4B: STANDARD REDUCTION POTENTIALS
TABEL 4B: STANDAARD-REDUKSIEPOTENSIALE

Increasing oxidising ability/Toenemende oksiderende vermoë

Half-reactions/Halfreaksies	E° (V)
$\text{Li}^{+} + \text{e}^{-} \rightleftharpoons \text{Li}$	-3,05
$\text{K}^{+} + \text{e}^{-} \rightleftharpoons \text{K}$	-2,93
$\text{Cs}^{+} + \text{e}^{-} \rightleftharpoons \text{Cs}$	-2,92
$\text{Ba}^{2+} + 2\text{e}^{-} \rightleftharpoons \text{Ba}$	-2,90
$\text{Sr}^{2+} + 2\text{e}^{-} \rightleftharpoons \text{Sr}$	-2,89
$\text{Ca}^{2+} + 2\text{e}^{-} \rightleftharpoons \text{Ca}$	-2,87
$\text{Na}^{+} + \text{e}^{-} \rightleftharpoons \text{Na}$	-2,71
$\text{Mg}^{2+} + 2\text{e}^{-} \rightleftharpoons \text{Mg}$	-2,36
$\text{Al}^{3+} + 3\text{e}^{-} \rightleftharpoons \text{Al}$	-1,66
$\text{Mn}^{2+} + 2\text{e}^{-} \rightleftharpoons \text{Mn}$	-1,18
$\text{Cr}^{2+} + 2\text{e}^{-} \rightleftharpoons \text{Cr}$	-0,91
$2\text{H}_2\text{O} + 2\text{e}^{-} \rightleftharpoons \text{H}_2(\text{g}) + 2\text{OH}^{-}$	-0,83
$\text{Zn}^{2+} + 2\text{e}^{-} \rightleftharpoons \text{Zn}$	-0,76
$\text{Cr}^{3+} + 3\text{e}^{-} \rightleftharpoons \text{Cr}$	-0,74
$\text{Fe}^{2+} + 2\text{e}^{-} \rightleftharpoons \text{Fe}$	-0,44
$\text{Cr}^{3+} + \text{e}^{-} \rightleftharpoons \text{Cr}^{2+}$	-0,41
$\text{Cd}^{2+} + 2\text{e}^{-} \rightleftharpoons \text{Cd}$	-0,40
$\text{Co}^{2+} + 2\text{e}^{-} \rightleftharpoons \text{Co}$	-0,28
$\text{Ni}^{2+} + 2\text{e}^{-} \rightleftharpoons \text{Ni}$	-0,27
$\text{Sn}^{2+} + 2\text{e}^{-} \rightleftharpoons \text{Sn}$	-0,14
$\text{Pb}^{2+} + 2\text{e}^{-} \rightleftharpoons \text{Pb}$	-0,13
$\text{Fe}^{3+} + 3\text{e}^{-} \rightleftharpoons \text{Fe}$	-0,06
$2\text{H}^{+} + 2\text{e}^{-} \rightleftharpoons \text{H}_2(\text{g})$	0,00
$\text{S} + 2\text{H}^{+} + 2\text{e}^{-} \rightleftharpoons \text{H}_2\text{S}(\text{g})$	+0,14
$\text{Sn}^{4+} + 2\text{e}^{-} \rightleftharpoons \text{Sn}^{2+}$	+0,15
$\text{Cu}^{2+} + \text{e}^{-} \rightleftharpoons \text{Cu}^{+}$	+0,16
$\text{SO}_4^{2-} + 4\text{H}^{+} + 2\text{e}^{-} \rightleftharpoons \text{SO}_2(\text{g}) + 2\text{H}_2\text{O}$	+0,17
$\text{Cu}^{2+} + 2\text{e}^{-} \rightleftharpoons \text{Cu}$	+0,34
$2\text{H}_2\text{O} + \text{O}_2 + 4\text{e}^{-} \rightleftharpoons 4\text{OH}^{-}$	+0,40
$\text{SO}_2 + 4\text{H}^{+} + 4\text{e}^{-} \rightleftharpoons \text{S} + 2\text{H}_2\text{O}$	+0,45
$\text{Cu}^{+} + \text{e}^{-} \rightleftharpoons \text{Cu}$	+0,52
$\text{I}_2 + 2\text{e}^{-} \rightleftharpoons 2\text{I}^{-}$	+0,54
$\text{O}_2(\text{g}) + 2\text{H}^{+} + 2\text{e}^{-} \rightleftharpoons \text{H}_2\text{O}_2$	+0,68
$\text{Fe}^{3+} + \text{e}^{-} \rightleftharpoons \text{Fe}^{2+}$	+0,77
$\text{NO}_3^{-} + 2\text{H}^{+} + \text{e}^{-} \rightleftharpoons \text{NO}_2(\text{g}) + \text{H}_2\text{O}$	+0,80
$\text{Ag}^{+} + \text{e}^{-} \rightleftharpoons \text{Ag}$	+0,80
$\text{Hg}^{2+} + 2\text{e}^{-} \rightleftharpoons \text{Hg}(\ell)$	+0,85
$\text{NO}_3^{-} + 4\text{H}^{+} + 3\text{e}^{-} \rightleftharpoons \text{NO}(\text{g}) + 2\text{H}_2\text{O}$	+0,96
$\text{Br}_2(\ell) + 2\text{e}^{-} \rightleftharpoons 2\text{Br}^{-}$	+1,07
$\text{Pt}^{2+} + 2\text{e}^{-} \rightleftharpoons \text{Pt}$	+1,20
$\text{MnO}_2 + 4\text{H}^{+} + 2\text{e}^{-} \rightleftharpoons \text{Mn}^{2+} + 2\text{H}_2\text{O}$	+1,23
$\text{O}_2(\text{g}) + 4\text{H}^{+} + 4\text{e}^{-} \rightleftharpoons 2\text{H}_2\text{O}$	+1,23
$\text{Cr}_2\text{O}_7^{2-} + 14\text{H}^{+} + 6\text{e}^{-} \rightleftharpoons 2\text{Cr}^{3+} + 7\text{H}_2\text{O}$	+1,33
$\text{Cl}_2(\text{g}) + 2\text{e}^{-} \rightleftharpoons 2\text{Cl}^{-}$	+1,36
$\text{MnO}_4^{-} + 8\text{H}^{+} + 5\text{e}^{-} \rightleftharpoons \text{Mn}^{2+} + 4\text{H}_2\text{O}$	+1,51
$\text{H}_2\text{O}_2 + 2\text{H}^{+} + 2\text{e}^{-} \rightleftharpoons 2\text{H}_2\text{O}$	+1,77
$\text{Co}^{3+} + \text{e}^{-} \rightleftharpoons \text{Co}^{2+}$	+1,81
$\text{F}_2(\text{g}) + 2\text{e}^{-} \rightleftharpoons 2\text{F}^{-}$	+2,87

Increasing reducing ability/Toenemende reduserende vermoë

CENTRE NUMBER:														
EXAMINATION NUMBER:														

QUESTION 5.3.2

Hand in this **GRAPH SHEET** with your **ANSWER BOOK**.

