

SA's Leading Past Year

Exam Paper Portal



You have Downloaded, yet Another Great  
Resource to assist you with your Studies 😊

Thank You for Supporting SA Exam Papers

Your Leading Past Year Exam Paper Resource Portal

Visit us @ [www.saexampapers.co.za](http://www.saexampapers.co.za)



**SA EXAM  
PAPERS**



# basic education

Department:  
Basic Education  
**REPUBLIC OF SOUTH AFRICA**

## **NATIONAL SENIOR CERTIFICATE**

**GRADE 12**

**ELECTRICAL TECHNOLOGY**

**FEBRUARY/MARCH 2014**

**MARKS: 200**

**TIME: 3 hours**

**This question paper consists of 12 pages and 1 formula sheet.**

**INSTRUCTIONS AND INFORMATION**

1. Answer ALL the questions.
2. Sketches and diagrams must be large, neat and fully labelled.
3. ALL calculations must be shown and must be correctly rounded off to TWO decimal places.
4. Number the answers correctly according to the numbering system used in this question paper.
5. Non-programmable calculators may be used.
6. Show the units of answers for all calculations.
7. A formula sheet is attached at the end of this question paper.
8. Write neatly and legibly.

**QUESTION 1: TECHNOLOGY, SOCIETY AND THE ENVIRONMENT**

- 1.1 Technological advancements have an impact on society.
- 1.1.1 State ONE modern invention in electrical technology. (1)
- 1.1.2 Describe ONE advantage of the invention in QUESTION 1.1.1 for society. (2)
- 1.2 The generation of electricity is crucial to the economy of South Africa.
- 1.2.1 Name TWO positive effects of the generation of electricity on society. (2)
- 1.2.2 Describe ONE negative effect the generation of electricity will have on the environment. (2)
- 1.3 Name ONE skill an entrepreneur needs to be successful. (1)
- 1.4 Unemployment is a huge problem in any country. Explain how entrepreneurs may help to reduce this problem. (2)
- [10]**

**QUESTION 2: TECHNOLOGICAL PROCESS**

- 2.1 A power source is needed to test the PAT project. Name THREE power sources which may be used to supply power to the PAT project. (3)
- 2.2 With regard to the technological process, describe the term *design specifications*. (2)
- 2.3 Give ONE example of a design specification. (2)
- 2.4 Explain why investigation forms an important part of the PAT design. (3)
- [10]**

**QUESTION 3: OCCUPATIONAL HEALTH AND SAFETY**

- 3.1 List FOUR unsafe conditions in an electrical workshop. (4)
- 3.2 Explain why safety signs are important in an electrical workshop. (3)
- 3.3 Describe the negative effect HIV/Aids may have on the workforce. (3)
- [10]**

**QUESTION 4: THREE-PHASE AC GENERATION**

- 4.1 State TWO advantages of three-phase generation over single-phase generation. (2)
- 4.2 Name TWO methods used to improve the power factor of a resistive inductive load. (2)
- 4.3 A three-phase delta-connected motor draws 25 A from a 380 V/50 Hz supply at a power factor of 0,9 lagging.

Given:

$$\begin{aligned}I_L &= 25 \text{ A} \\ \cos \theta &= 0,9 \\ V_L &= 380 \text{ V} \\ f &= 50 \text{ Hz}\end{aligned}$$

Calculate:

- 4.3.1 The input power (3)
- 4.3.2 The apparent power (3)
- [10]**

**QUESTION 5: RLC CIRCUITS**

- 5.1 State TWO practical applications of RLC circuits. (2)
- 5.2 An incandescent lamp is connected in series with a capacitor across an AC power supply.
- 5.2.1 State what will happen to the brightness of the lamp when the capacitance of the capacitor is decreased. (1)
- 5.2.2 Explain what will happen to the brightness of the lamp if the frequency of the supply is increased. (4)
- 5.3 Explain the term *capacitive reactance* with reference to an AC circuit. (2)
- 5.4 A 47  $\Omega$  resistor, a 0,22 H inductor and a 55  $\mu\text{F}$  capacitor are all connected in parallel across a 220 V/50 Hz supply.

Given:

$$\begin{aligned}R &= 47 \Omega \\ L &= 0,22 \text{ H} \\ C &= 55 \mu\text{F} \\ V &= 220 \text{ V} \\ f &= 50 \text{ Hz}\end{aligned}$$

Calculate:

5.4.1 The inductive reactance of the circuit (3)

5.4.2 The capacitive reactance of the circuit (3)

5.4.3 The current flowing through each component (9)

5.4.4 The supply current (3)

5.5 FIGURE 5.1 shows a series RLC circuit. Calculate the supply voltage of the circuit.

Given:

$$\begin{aligned}V_R &= 100 \text{ V} \\V_L &= 261 \text{ V} \\V_C &= 65 \text{ V} \\f &= 50 \text{ Hz}\end{aligned}$$

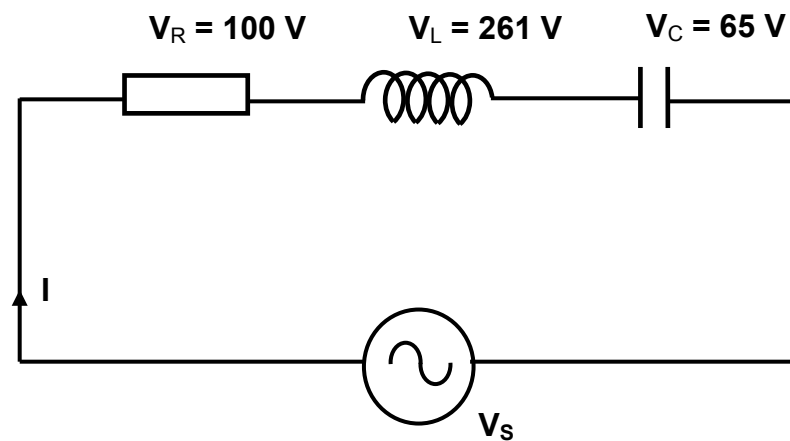
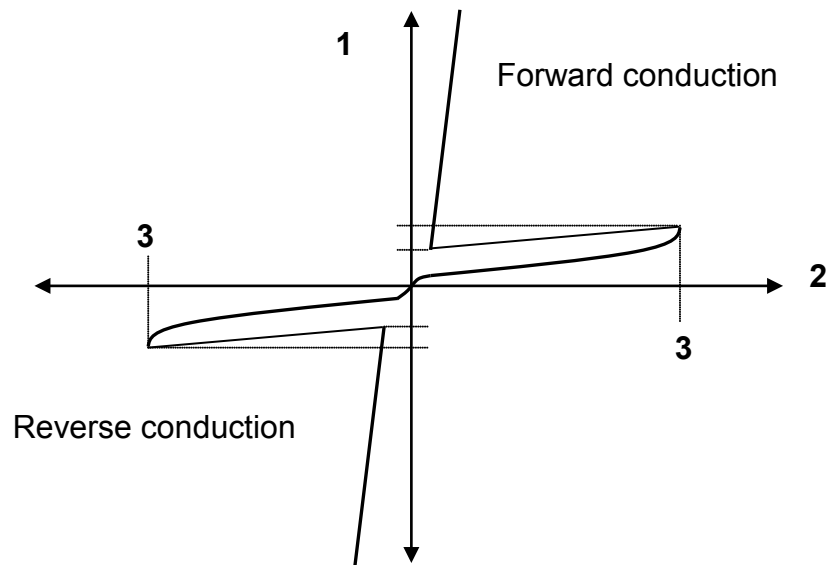


FIGURE 5.1: RLC CIRCUIT

(3)  
[30]

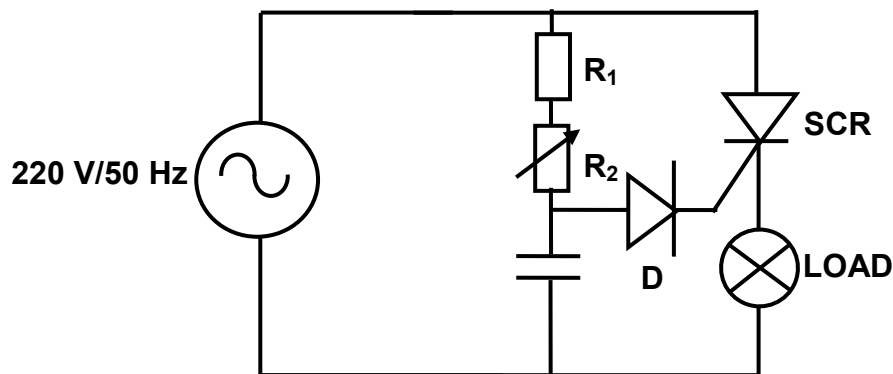
**QUESTION 6: SWITCHING AND CONTROL CIRCUITS**

- 6.1 Draw a fully labelled symbol of a TRIAC. (3)
- 6.2 Describe TWO methods to switch on a TRIAC. (4)
- 6.3 Explain ONE advantage of a TRIAC over an SCR. (2)
- 6.4 The diagram in FIGURE 6.1 shows the characteristic curve of a DIAC. (2)

**FIGURE 6.1: CHARACTERISTIC CURVE OF A DIAC**

- 6.4.1 Name the units of axis 1 and axis 2. (2)
- 6.4.2 State what happens to the voltage and current of the DIAC at point 3. (2)
- 6.4.3 Describe ONE method to switch off a DIAC. (2)

- 6.5 The circuit diagram in FIGURE 6.2 is connected across a 220 V/50 Hz supply. The circuit uses an SCR to control the brightness of the lamp.



**FIGURE 6.2: LAMP-DIMMING CIRCUIT**

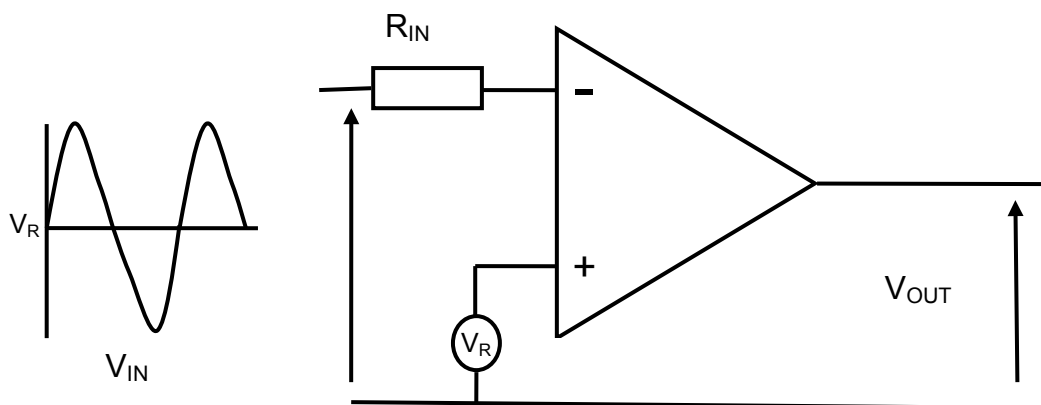
- 6.5.1 State the function of  $R_1$ . (1)
- 6.5.2 Describe how the brightness of the lamp is controlled by the circuit. (5)
- 6.5.3 Draw the output voltage waveform across the lamp if the firing angle of the SCR is  $45^\circ$ . (4)
- [25]**



**QUESTION 7: AMPLIFIERS**

7.1 List THREE characteristics of an ideal op amp. (3)

7.2 FIGURE 7.1 shows an op-amp circuit.

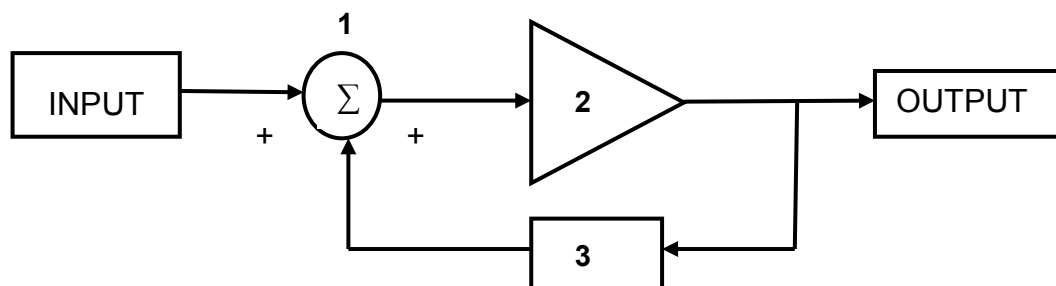


**FIGURE 7.1: OP-AMP CIRCUIT**

7.2.1 Name the op-amp circuit. (1)

7.2.2 Draw the input and output waveforms. (3)

7.3 FIGURE 7.2 is a block diagram of a feedback circuit.



**FIGURE 7.2: BLOCK DIAGRAM OF A FEEDBACK CIRCUIT**

7.3.1 Identify the type of feedback in this circuit. (1)

7.3.2 Name labels 1, 2 and 3. (3)

7.4 Explain the purpose of negative feedback in linear amplifiers. (2)

7.5 Name the TWO basic modes in which op amps may be connected. (2)

7.6 State TWO applications of an op amp. (2)

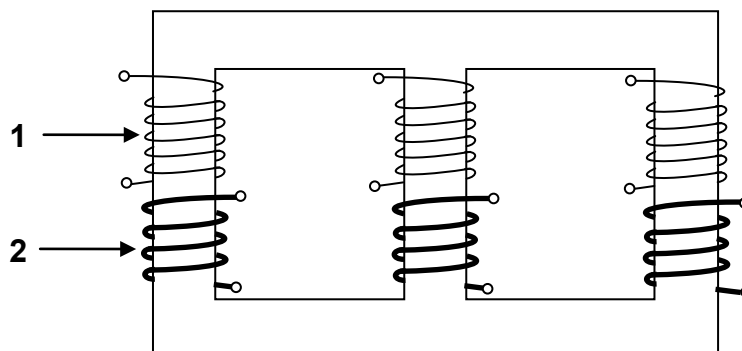
7.7 State TWO disadvantages of op amps. (2)

7.8 Draw a circuit of an inverting op amp. (6)

**[25]**

**QUESTION 8: THREE-PHASE TRANSFORMERS**

8.1 The diagram in FIGURE 8.1 shows a three-phase step-down transformer.



**FIGURE 8.1: THREE-PHASE STEP-DOWN TRANSFORMER**

- 8.1.1 Name winding 1 and winding 2. (2)
- 8.1.2 State ONE combination in which the transformer can be connected. (1)
- 8.1.3 Describe why one set of coils has a thicker gauge than the other set of coils. (3)

8.2 A three-phase transformer is connected in delta-star and delivers 12 kW at full load. The transformer has a power factor of 0,8 and an efficiency of 100%.

Given:

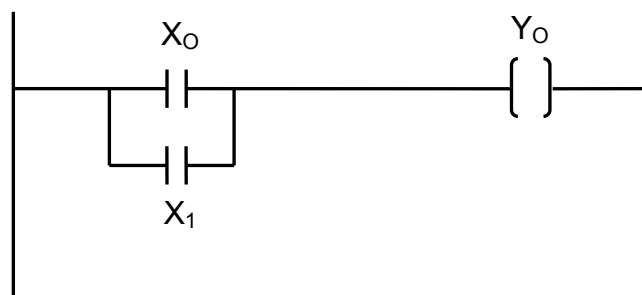
$$\begin{aligned}P_{\text{OUT}} &= 12 \text{ kW} \\ \eta &= 100\% \\ \cos \theta &= 0,8\end{aligned}$$

- 8.2.1 Calculate the input kVA to the transformer (apparent power). (3)
- 8.2.2 State and describe ONE transformer loss. (3)
- 8.2.3 If the load of the transformer is decreased, describe how this will affect the primary and secondary current of the transformer. (3)

**[15]**

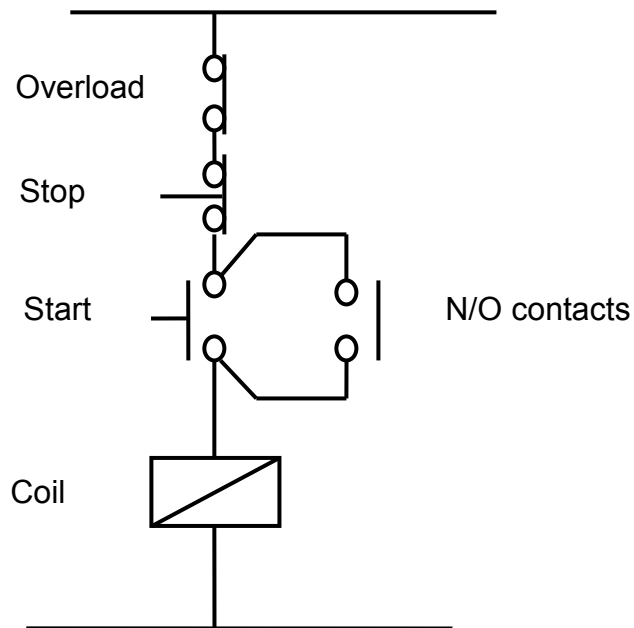
**QUESTION 9: LOGIC CONCEPTS AND PLCs**

- 9.1 Draw a block diagram of a basic PLC system. (4)
- 9.2 Name TWO applications of a PLC. (2)
- 9.3 Describe the term *ladder logic* used in the programming of PLCs. (3)
- 9.4 Name TWO types of counters used in logic systems. (2)
- 9.5 List THREE basic operands used in the programming of PLCs. (3)
- 9.6 Draw the ladder diagram symbols of the following:
- 9.6.1 Relay or other type of device used as an output from a PLC (1)
- 9.6.2 A normally closed switch or other type of normally closed device used as an input to a PLC (1)
- 9.6.3 A normally open switch or other type of normally open device used as input to a PLC (1)
- 9.7 FIGURE 9.1 shows a ladder diagram.

**FIGURE 9.1: LADDER DIAGRAM**

- 9.7.1 Draw the circuit diagram represented in FIGURE 9.1. (3)
- 9.7.2 Name the logic gate the circuit represents. (1)
- 9.7.3 Draw the truth table for the logic gate in QUESTION 9.7.2. (4)
- 9.7.4 Draw the logic symbol that represents the gate in QUESTION 9.7.2. (2)

9.8 FIGURE 9.2 shows a control circuit.



**FIGURE 9.2: CONTROL CIRCUIT**

- 9.8.1 Name the control circuit. (1)
- 9.8.2 Draw the ladder logic programming diagram for this circuit. (6)
- 9.8.3 Name a practical application of the circuit. (1)
- [35]**

**QUESTION 10: THREE-PHASE MOTORS AND CONTROL**

- 10.1 Name THREE parts of a three-phase induction motor. (3)
- 10.2 State ONE loss that occurs in an induction motor. (1)
- 10.3 Name THREE practical uses of three-phase motors. (3)
- 10.4 Describe the function of an emergency stop button. (2)
- 10.5 State where an emergency stop button must be located. (1)
- 10.6 Explain what will happen if a short circuit occurs in one winding of a three-phase motor. (2)
- 10.7 Describe why it is important to test the insulation resistance between the windings and the frame of the motor. (3)
- 10.8 Describe the function of an overload unit in a motor control circuit. (3)
- 10.9 Describe the function of a star-delta starter. (3)
- 10.10 A 5 kW motor is connected in delta to a 380 V/50 Hz supply. The motor has a power factor of 0,8.

Given:

$$\begin{aligned} P &= 5 \text{ kW} \\ V_L &= 380 \text{ V} \\ f &= 50 \text{ Hz} \\ \text{pf} &= 0,8 \end{aligned}$$

Calculate:

- 10.10.1 The line current drawn by the motor at full load (3)
- 10.10.2 The phase current drawn by the motor at full load (3)
- 10.11 If the power factor of the three-phase induction motor was improved, describe what would happen to the apparent power of the motor. (3)

**[30]**

**TOTAL: 200**

**FORMULA SHEET**

$$X_L = 2\pi FL$$

$$X_C = \frac{1}{2\pi FC}$$

$$Z = \sqrt{R^2 + (X_L \cong X_C)^2}$$

$$I_T = \sqrt{I_R^2 + (I_C \cong I_L)^2}$$

$$V_T = \sqrt{V_R^2 + (V_C \cong V_L)^2}$$

$$V_R = IR$$

$$V_L = IX_L$$

$$V_C = IX_C$$

$$f_r = \frac{1}{2\pi\sqrt{LC}}$$

$$Q = \frac{1}{R}\sqrt{\frac{L}{C}}$$

$$Q = \frac{X_L}{R} = \frac{V_L}{V_R}$$

$$\cos\theta = \frac{I_R}{I_T}$$

$$\cos\theta = \frac{R}{Z}$$

$$\left. \begin{aligned} P &= VI \cos\theta \\ S &= VI \\ Q &= VI \sin\theta \end{aligned} \right\} \text{Single phase}$$

$$\left. \begin{aligned} P &= \sqrt{3} V_L I_L \cos\theta \\ S &= \sqrt{3} V_L I_L \\ Q &= \sqrt{3} V_L I_L \sin\theta \end{aligned} \right\} \text{Three phase}$$

$$\left. \begin{aligned} V_L &= V_{Ph} \\ I_L &= \sqrt{3} I_{Ph} \end{aligned} \right\} \text{Delta}$$

$$\left. \begin{aligned} V_L &= \sqrt{3} V_{Ph} \\ I_L &= I_{Ph} \end{aligned} \right\} \text{Star}$$

$$f = \frac{1}{T}$$

$$\frac{V_{ph(P)}}{V_{ph(S)}} = \frac{N_P}{N_S} = \frac{I_{ph(S)}}{I_{ph(P)}}$$