

SA's Leading Past Year

Exam Paper Portal



You have Downloaded, yet Another Great Resource to assist you with your Studies 😊

Thank You for Supporting SA Exam Papers

Your Leading Past Year Exam Paper Resource Portal

Visit us @ www.saexampapers.co.za





KWAZULU-NATAL PROVINCE

EDUCATION
REPUBLIC OF SOUTH AFRICA

**NATIONAL
SENIOR CERTIFICATE**

GRADE 12

PHYSICAL SCIENCES P2 (CHEMISTRY)

PREPARATORY EXAMINATION

SEPTEMBER 2023

MARKS: 150

TIME : 3 Hours

This question paper consists of 14 pages and 4 data sheets.

Copyright reserved

Please turn over

INSTRUCTIONS AND INFORMATION

1. Write your centre number and examination number in the appropriate spaces on the ANSWER BOOK.
2. This question paper consists of NINE questions. Answer ALL the questions in the ANSWER BOOK.
3. Start EACH question on a NEW page in the ANSWER BOOK.
4. Number the answers correctly according to the numbering system used in this question paper.
5. Leave ONE line between two sub-questions, for example between QUESTION 2.1 and QUESTION 2.2.
6. You may use a non-programmable calculator.
7. You may use appropriate mathematical instruments.
8. You are advised to use the attached DATA SHEETS.
9. Show ALL formulae and substitutions in ALL calculations.
10. Round off your final numerical answers to a minimum of TWO decimal places.
11. Give brief motivations, discussions et cetera where required.
12. Write neatly and legibly.

QUESTION 1: MULTIPLE-CHOICE QUESTIONS

Various options are provided as possible answers to the following questions. Choose the answer and write only the letter (A-D) next to the question number (1.1-1.10) in the ANSWER BOOK, for example 1.11 D.

1.1 Which ONE of the following homologous series does NOT contain a CARBONYL GROUP?

- A Esters
- B Alcohols
- C Aldehydes
- D Carboxylic acids

(2)

1.2 Which of the following statements COULD apply to compounds that are structural isomers of one another?

- (I) They have the same structural formula.
- (II) They have the same molecular formula.
- (III) They may belong to the same homologous series.

- A (I), (II) and (III)
- B (I) and (III)
- C (I) and (II)
- D (II) and (III)

(2)

1.3 Compound X undergoes a combustion reaction according to the following equation:



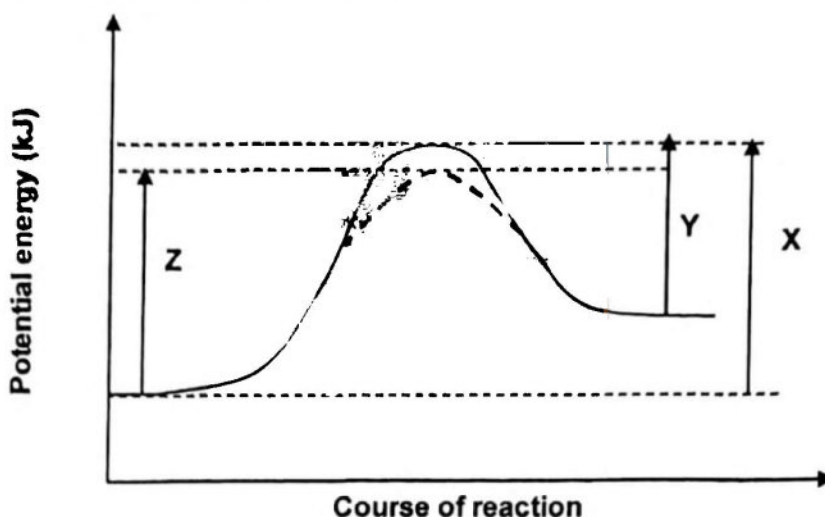
What is the IUPAC name of compound X?

- A Hexane
- B Hex – 2 – ene
- C Propane
- D Hexanoic acid

(2)



- 1.4 The energy changes represented by X, Y and Z on the potential energy graph below takes place during a catalysed, reversible chemical reaction.

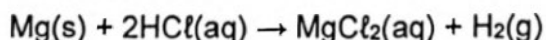


Which ONE of the following represents the heat of the reaction for the **FORWARD** reaction?

- A X – Y
- B Y – Z
- C Z – X
- D X – Z

(2)

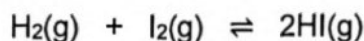
- 1.5 Which ONE of the following statements correctly describes the rate of reaction for the following reaction?



- A The time it takes to use up the reactants.
- B The decrease in the concentration of magnesium per unit time.
- C The time it takes for one of the reactants to be completely used up.
- D The increase in the concentration of $\text{MgCl}_2\text{(aq)}$ per unit time.

(2)

- 1.6 Consider the reaction represented by the following balanced chemical equation:



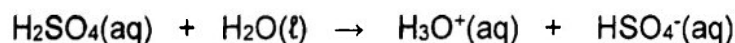
The system is initially at equilibrium.

The pressure is increased by decreasing the volume of the container at constant temperature. How will the amount of HI(g) and the concentration of HI(g) change?

	AMOUNT OF HI (g)	CONCENTRATION OF HI (g)
A	Remains the same	Remains the same
B	Decreases	Decreases
C	Remains the same	Increases
D	Remains the same	Decreases

(2)

- 1.7 Consider the reaction represented by the balanced equation below:



Which ONE of the following is a conjugate acid-base pair?

- A $\text{H}_3\text{O}^+(\text{aq})$ and $\text{H}_2\text{O}(\text{l})$
 B $\text{H}_3\text{O}^+(\text{aq})$ and $\text{HSO}_4^-(\text{aq})$
 C $\text{H}_2\text{SO}_4(\text{aq})$ and $\text{H}_2\text{O}(\text{l})$
 D $\text{H}_2\text{SO}_4(\text{aq})$ and $\text{H}_3\text{O}^+(\text{aq})$

(2)

- 1.8 Which ONE of the following gives the approximate pH of an aqueous solution of sodium carbonate and the relevant hydrolysis equation?

	pH	HYDROLYSIS EQUATION
A	Less than 7	$\text{CO}_3^{2-} + \text{H}_2\text{O} \rightleftharpoons \text{HCO}_3^- + \text{OH}^-$
B	Less than 7	$\text{Na}^+ + \text{H}_2\text{O} \rightleftharpoons \text{NaOH} + \text{H}^+$
C	Greater than 7	$\text{CO}_3^{2-} + \text{H}_2\text{O} \rightleftharpoons \text{HCO}_3^- + \text{OH}^-$
D	Greater than 7	$\text{Na}^+ + \text{H}_2\text{O} \rightleftharpoons \text{NaOH} + \text{H}^+$

(2)

1.9

The following half reactions and standard electrode potentials are provided.

HALF REACTION	STANDARD ELECTRODE POTENTIAL(E°) IN VOLTS(V)
$W^+ + e^- \rightleftharpoons W$	-1,8
$X^{2+} + 2e^- \rightleftharpoons X$	+0,3
$Y^+ + e^- \rightleftharpoons Y$	-0,9
$Z^{2+} + 2e^- \rightleftharpoons Z$	-0,3

Which ONE of the following combinations is correct for the above galvanic cell?

	ANODE	CATHODE
A	X	Y
B	Y	X
C	Y	Z
D	W	Z

(2)

1.10 Consider the following reactions for a metal P:

- (i) P reacts with a solution of silver nitrate resulting in a deposit of metallic silver.
- (ii) P does not react with a solution of zinc sulphate.

Which ONE of the following correctly lists the metals, P; Ag and Zn in order of **DECREASING** strengths of reducing agents?

- A P; Ag; Zn
- B Zn; P; Ag
- C Ag; P; Zn
- D Ag; Zn; P

(2)
[20]

QUESTION 2 (Start on a new page.)

The letters **A** to **F** in the table below represent organic compounds.

A	$ \begin{array}{ccccccc} & & \text{H} & & \text{H} & & \\ & & & & & & \\ \text{H} & - & \text{C} & - & \text{C} & - & \text{C} = \text{C} - \text{H} \\ & & & & & & \\ & & \text{CH}_3 & & \text{H} & & \text{CH}_3 \end{array} $		
B	$ \begin{array}{ccccccc} & & \text{H} & & \text{CH}_3 & & \\ & & & & & & \\ \text{H} & - & \text{C} & - & \text{C} & - & \text{C} \equiv \text{C} - \text{C} - \text{H} \\ & & & & & & \\ & & \text{CH}_3 & & \text{H} & & \text{H} \end{array} $		
C	$\text{CH}_3\text{CH}_2\text{CH}_2\text{CH}_2\text{CH}_2\text{COOH}$	D	$\text{C}_3\text{H}_6\text{O}_2$
E	Pentan – 2 – one	F	2,2 – dimethylpropane

Use the information in the table to answer the questions that follow.

2.1 Write down the letter/s that represent/s:

2.1.1 TWO compounds with a pH less than 7 (2)

2.1.2 A CHAIN ISOMER of $\text{CH}_3(\text{CH}_2)_3\text{CH}_3$ (1)

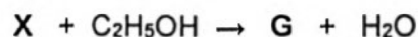
2.1.3 A substance with a fruity smell (1)

2.2 Write down the IUPAC name of compound **A**. (2)

2.3 Define the term *homologous series*. (2)

2.4 Write down the general formula of the homologous series to which compound **B** belongs (1)

2.5 A straight chain organic acid **X**, ethanol and a catalyst are heated to produce the organic compound **G**. The equation below represents the reaction that takes place:



The molecular mass of compound **G** is 116 g.mol^{-1} and its empirical formula is $\text{C}_3\text{H}_6\text{O}$.

2.5.1 Write down the name of the reaction that produces compound **G**. (1)

2.5.2 Write down the NAME or FORMULA of the catalyst that can be used in (1)

2.5.3 Write down the STRUCTURAL FORMULA of the organic compound X. (3)

2.6 Define the term *functional isomer*. (2)

2.7 Write down the STRUCTURAL FORMULA of the FUNCTIONAL isomer of compound E. (2)
[18]

QUESTION 3 (Start on a new page.)

Organic compounds A, B, C and D of comparable molecular mass are used to investigate the relationship between homologous series and vapour pressure at a temperature of 20°C. The results obtained are shown in the table below.

ORGANIC COMPOUND	VAPOUR PRESSURE (kPa) at 20 °C
A	1,6
B	2
C	24,6
D	204

3.1 Define *vapour pressure*. (2)

3.2 Give a reason why the temperature is specified. (1)

3.3 For this experiment write down the:

3.3.1 Dependent variable (1)

3.3.2 Controlled variable (1)

3.4 Arrange the compounds A, B, C and D in order of INCREASING boiling point. (2)

The compounds A, B, C and D IN RANDOM ORDER represent propan-1-ol, ethanoic acid, butane and 2-propanone.

3.5 Write down the vapour pressure of ethanoic acid at 20 °C. (1)

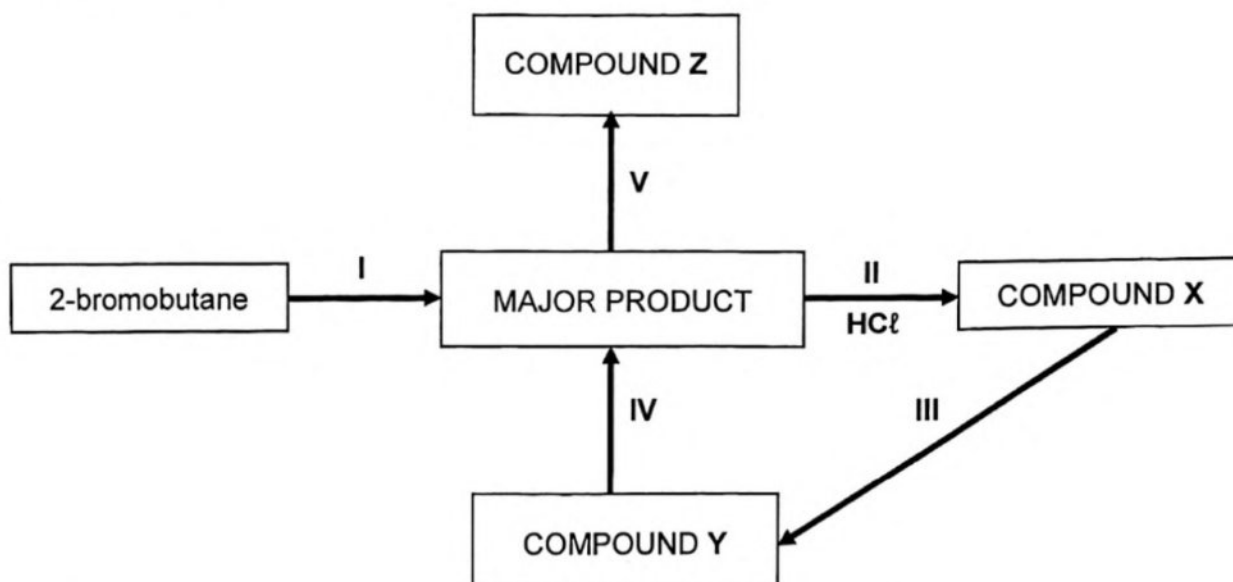
3.6 Fully explain the answer to Question 3.5 by referring to intermolecular forces and vapour pressures. (3)

3.7 Which compound represents 2-propanone?

Explain how you arrived at the answer (4)
[15]

QUESTION 4 (Start on a new page.)

In the flow diagram below, I, II, III, IV and V are organic reactions. X, Y and Z represent organic compounds.



4.1 Reaction I is an elimination reaction.

4.1.1 Name the type of elimination reaction taking place. (1)

4.1.2 Write down the structural formula for the MAJOR PRODUCT formed. (2)

4.1.3 Write down the balanced equation for the reaction using MOLECULAR FORMULAE. (3)

4.2 Reaction II is an addition reaction.
Write down the IUPAC name of COMPOUND X. (2)

4.3 In reaction III, COMPOUND X, is heated with dilute sodium hydroxide.

4.3.1 Name the type of reaction taking place. (1)

4.3.2 Write down the IUPAC name of COMPOUND Y. (2)

4.4 In reaction IV COMPOUND Y, is heated under reflux with concentrated sulphuric acid.

4.4.1 Name the type of reaction taking place. (1)

4.4.2 Write down the NAME or FORMULA of the INORGANIC product formed. (1)

4.5 Compound Z is a saturated hydrocarbon.

4.5.1 Name the type of addition reaction represented by reaction V. (1)

4.5.2 Write down the NAME or FORMULA of the catalyst used in reaction V. (1)

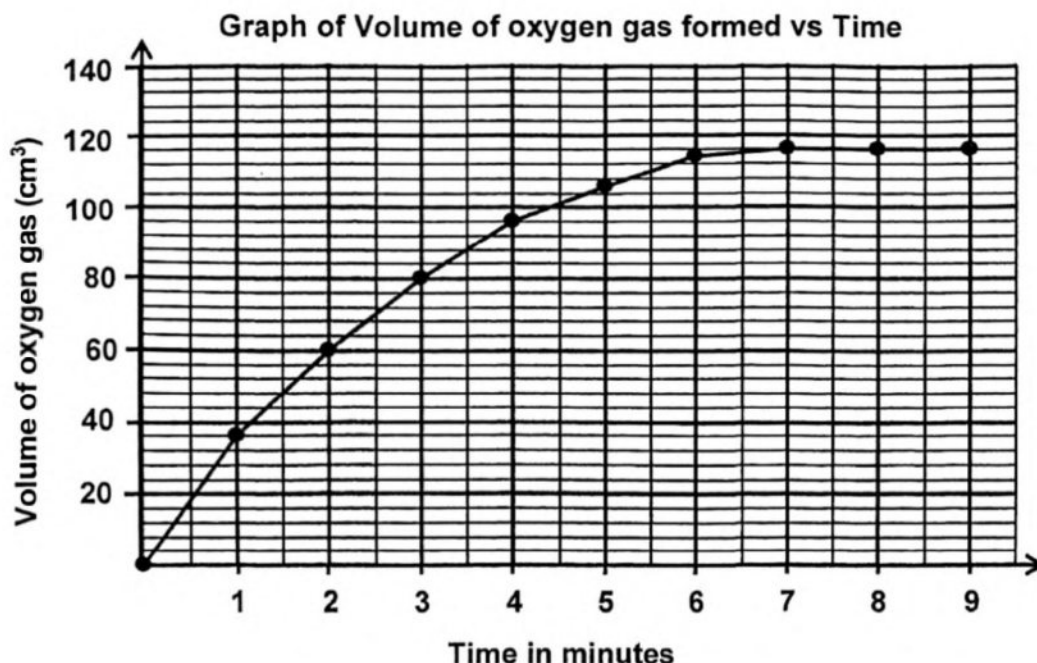
[15]

QUESTION 5 (Start on a new page)

Manganese dioxide (MnO_2) catalyses the decomposition of a solution of hydrogen peroxide, $\text{H}_2\text{O}_2(\text{aq})$:



Manganese dioxide of mass 0,1 g was added to a flask containing 200 cm^3 of a solution of hydrogen peroxide of concentration $0,2 \text{ mol}\cdot\text{dm}^{-3}$. The oxygen gas produced was collected at **standard temperature and pressure** and the volume measured every minute using a gas syringe. The following graph was obtained:



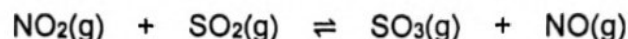
The reaction stops before all the hydrogen peroxide decomposes.

- 5.1 How long did it take for the reaction to stop? (1)
- 5.2 How does the volume of oxygen gas collected compare for EVERY MINUTE as the reaction progresses? Choose from INCREASES, DECREASES or REMAINS THE SAME. (1)
- 5.3 What mass of manganese dioxide is present in the flask after 8 minutes? (1)
- 5.4 Using the collision theory, fully explain the shape of the graph from the time the reaction starts to the time the reaction stops. (4)
- 5.5 Using the information provided and the graph, calculate the concentration of the hydrogen peroxide REMAINING when the reaction has stopped. (9)

[16]

QUESTION 6 (Start on a new page)

6.1 Consider the reaction represented by the balanced equation below:



Initially 2 moles of $\text{NO}_2(\text{g})$ and 2 moles of $\text{SO}_2(\text{g})$ were mixed in a sealed 2 dm^3 container. When equilibrium is reached at 700°C there are 60 g of $\text{SO}_3(\text{g})$ present in the container.

6.1.1 Define the term *chemical equilibrium*. (2)

6.1.2 Calculate the value of the equilibrium constant, K_c , for this reaction. (7)

6.2 Nitrosyl chloride gas, $\text{NOCl}_2(\text{g})$ is a yellow gas that decomposes into colourless nitrogen monoxide, $\text{NO}(\text{g})$, and green chlorine gas, $\text{Cl}_2(\text{g})$, at a temperature above 100°C .



Some NOCl_2 gas is sealed in a container. When equilibrium is reached, a mixture of NOCl_2 , NO and Cl_2 with a yellow-green colour is present in the container.

6.2.1 State Le Chatelier's Principle. (2)

The pressure in the container is changed without changing the temperature, resulting in the colour of the mixture changing to green.

6.2.2 Was the pressure INCREASED or DECREASED?
Use Le Chatelier's Principle to explain the answer. (3)

6.2.3 How does the change in pressure affect the amount of $\text{NO}(\text{g})$ at equilibrium? Choose from INCREASES, DECREASES or NO EFFECT. (1)

6.2.4 State ONE other change that can be made to the above system at equilibrium to bring about the same change to the amount of $\text{NO}(\text{g})$ identified in QUESTION 6.2.3 (1)
[16]

QUESTION 7 (Start on a new page.)

7.1 The acid HF ionizes according to the following equation:



When a $0,10 \text{ mol}\cdot\text{dm}^{-3}$ solution of HF is prepared, it is found that the concentration of the F^- ions is $0,018 \text{ mol}\cdot\text{dm}^{-3}$ at 25°C .

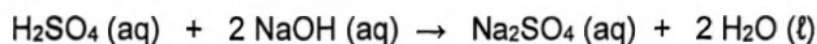
7.1.1 Define a *strong acid*. (2)

7.1.2 Is HF a strong acid? Choose from YES or NO.
Give a reason for the answer. (2)

7.1.3 Calculate the $[\text{OH}^-]$ in this solution. (3)

7.2 Sodium hydroxide (NaOH) pellets of mass **X** g are added to sufficient distilled water to prepare a solution of volume 25 cm^3 in a flask.

12 cm^3 of sulphuric acid, H_2SO_4 , of concentration $0,10 \text{ mol}\cdot\text{dm}^{-3}$ is added to the flask containing the sodium hydroxide. The total volume of the mixture formed is 37 cm^3 and its pH is 12,56.



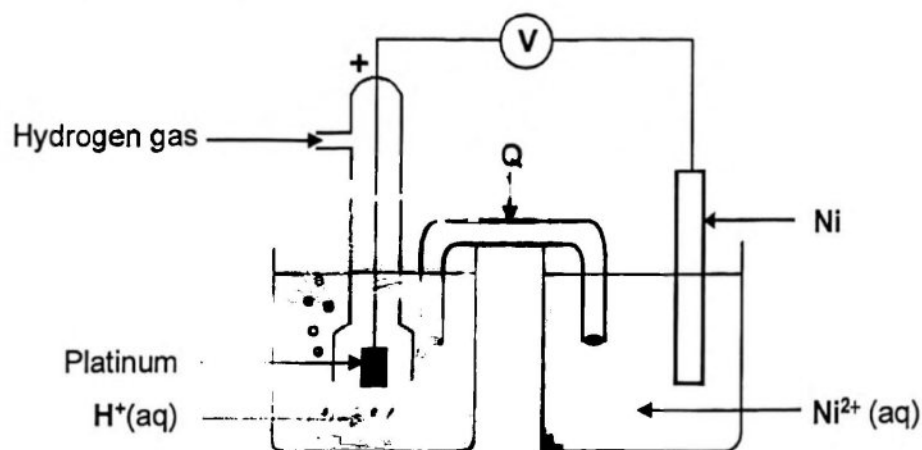
7.2.1 Explain the term *dilute acid*. (2)

7.2.2 How does the concentration of the hydronium ions compare to the concentration of the hydroxide ions in the mixture? Choose from LARGER THAN, SMALLER THAN or EQUAL TO. (1)

7.2.3 Calculate the value of **X**. (8)
[18]

QUESTION 8 (Start on a new page.)

An electrochemical cell is set up under standard conditions using a hydrogen half-cell and a nickel half-cell as shown in the simplified diagram below.

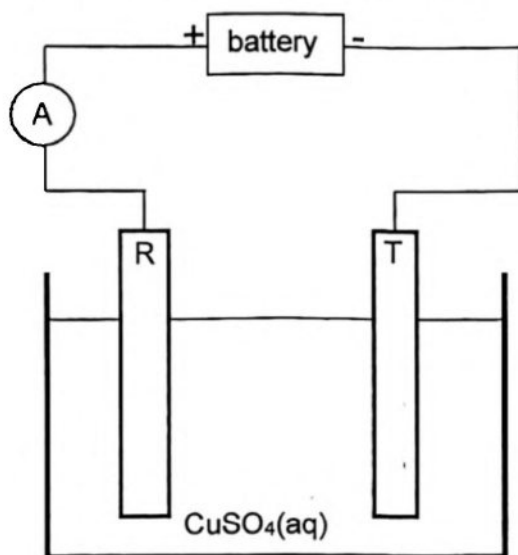


- 8.1 State the standard conditions, besides a temperature of 25 °C, under which this cell operates. (2)
- 8.2 Calculate the *initial* reading on the voltmeter. (4)
- 8.3 For this electrochemical cell, write down:
 - 8.3.1 The energy conversion that takes place (1)
 - 8.3.2 One function of component Q (1)
 - 8.3.3 Direction in which the anions in component Q will move. Choose from TOWARDS THE NICKEL HALF CELL or TOWARDS THE HYDROGEN HALF CELL (1)
 - 8.3.4 Half reaction that takes place at the anode (2)
- 8.4 How will the pH of the solution in the hydrogen half-cell be affected after a while? Choose from INCREASES, DECREASES, or REMAINS THE SAME. Explain the answer. (3)
- 8.5 The platinum electrode is replaced with a larger platinum electrode. How will this affect the initial emf of the cell? (Choose from INCREASES, DECREASES or NO EFFECT) (1)

[15]

QUESTION 9 (Start on a new page.)

The simplified diagram below represents an electrolytic cell used to purify copper.



- 9.1 Define the term *electrolysis*. (2)
- 9.2 Which electrode, R or T, consists of pure copper? Give a reason for the answer. (2)
- 9.3 Write down the half reaction that takes place at electrode R. (2)
- 9.4 How will the concentration of the electrolyte be affected while the cell is functioning? Choose from INCREASES, DECREASES, or REMAINS THE SAME.
Give a reason for the answer (2)
- 9.5 Zinc is one of the impurities found in the impure copper.
Will the presence of zinc ions influence the quality of the refined copper?
Choose from YES or NO.
Refer to relative strengths of oxidising agents to explain the answer. (3)
- 9.6 A constant current is registered on the ammeter and 1,72 g of the copper is deposited on the cathode in 30 minutes. Calculate the reading on the ammeter. (6)

TOTAL**[17]
150**

GEGEWENS VIR FISIESE WETenskAPPE GRAAD 12
VRAESTEL 2 (CHEMIE)

TABLE 1: PHYSICAL CONSTANTS/TABEL 1: FISIESE KONSTANTES

NAME/NAAM	SYMBOL/SIMBOOL	VALUE/WAARDE
Standard pressure <i>Standaarddruk</i>	p°	$1,013 \times 10^5 \text{ Pa}$
Molar gas volume at STP <i>Molêre gasvolume by STD</i>	V_m	$22,4 \text{ dm}^3 \cdot \text{mol}^{-1}$
Standard temperature <i>Standaardtemperatuur</i>	T°	273 K
Charge on electron <i>Lading op elektron</i>	E	$-1,6 \times 10^{-19} \text{ C}$
Avogadro's constant <i>Avogadro-konstante</i>	N_A	$6,02 \times 10^{23} \text{ mol}^{-1}$

TABLE 2: FORMULAE/TABEL 2: FORMULES

$n = \frac{m}{M}$	$n = \frac{N}{N_A}$
$c = \frac{n}{V}$ or/of $c = \frac{m}{MV}$	$n = \frac{V}{V_m}$
$\frac{c_a v_a}{c_b v_b} = \frac{n_a}{n_b}$	$\text{pH} = -\log[\text{H}_3\text{O}^+]$
$K_w = [\text{H}_3\text{O}^+][\text{OH}^-] = 1 \times 10^{-14} \text{ at/by } 298 \text{ K } (25^{\circ}\text{C})$	
$E_{\text{cell}}^{\circ} = E_{\text{cathode}}^{\circ} - E_{\text{anode}}^{\circ} / E_{\text{sel}}^{\circ} = E_{\text{katode}}^{\circ} - E_{\text{anode}}^{\circ}$ or/of $E_{\text{cell}}^{\circ} = E_{\text{reduction}}^{\circ} - E_{\text{oxidation}}^{\circ} / E_{\text{sel}}^{\circ} = E_{\text{reduksie}}^{\circ} - E_{\text{oksidasie}}^{\circ}$ or/of $E_{\text{cell}}^{\circ} = E_{\text{oxidising agent}}^{\circ} - E_{\text{reducing agent}}^{\circ} / E_{\text{sel}}^{\circ} = E_{\text{oksideermiddel}}^{\circ} - E_{\text{reduseermiddel}}^{\circ}$	
$q = I\Delta t$	
$n = \frac{Q}{e}$ or/of $n = \frac{Q}{q_e}$ Where n is the number of electrons	

TABLE 3: THE PERIODIC TABLE OF ELEMENTS

1 (I)	2 (II)	3	4	5	6	7	8	9	10	11	12	13 (III)	14 (IV)	15 (V)	16 (VI)	17 (VII)
1 H 1,01																
3 Li 6,94	4 Be 9,01															
11 Na 22,99	12 Mg 24,31															
19 K 39,10	20 Ca 40,08	21 Sc 44,96	22 Ti 47,88	23 V 50,94	24 Cr 52,00	25 Mn 54,94	26 Fe 55,85	27 Co 58,93	28 Ni 58,69	29 Cu 63,55	30 Zn 65,38	31 Ga 69,72	32 Ge 72,64	33 As 74,92	34 Se 78,96	35 Br 79,90
37 Rb 85,47	38 Sr 87,62	39 Y 88,91	40 Zr 91,22	41 Nb 92,91	42 Mo 95,94	43 Tc 98,91	44 Ru 101,07	45 Rh 102,91	46 Pd 106,42	47 Ag 107,87	48 Cd 112,41	49 In 114,82	50 Sn 118,71	51 Sb 121,76	52 Te 127,60	53 I 126,91
55 Cs 132,91	56 Ba 137,33	57 La 138,91	72 Hf 178,49	73 Ta 180,95	74 W 183,84	75 Re 186,21	76 Os 190,23	77 Ir 192,22	78 Pt 195,08	79 Au 196,97	80 Hg 200,59	81 Tl 204,38	82 Pb 207,2	83 Bi 208,98	84 Po 209	85 At 210
87 Fr 223	88 Ra 226	89 Ac														

58 Ce 140,12	59 Pr 140,91	60 Nd 144,24	61 Pm	62 Sm 150,36	63 Eu 151,96	64 Gd 157,25	65 Tb 158,93	66 Dy 162,50	67 Ho 164,93	68 Er 167,26	69 Tm 168,93	70 Yb 173,05	71 Lu 174,97
90 Th 232,04	91 Pa 231,04	92 U 238,03	93 Np	94 Pu	95 Am	96 Cm	97 Bk	98 Cf	99 Es	100 Fm	101 Md	102 No	103 Lr

29 Cu 63,55	29 Cu 63,55	29 Cu 63,55	29 Cu 63,55	29 Cu 63,55	29 Cu 63,55	29 Cu 63,55	29 Cu 63,55	29 Cu 63,55	29 Cu 63,55	29 Cu 63,55	29 Cu 63,55	29 Cu 63,55	29 Cu 63,55	29 Cu 63,55	29 Cu 63,55	29 Cu 63,55
-------------------	-------------------	-------------------	-------------------	-------------------	-------------------	-------------------	-------------------	-------------------	-------------------	-------------------	-------------------	-------------------	-------------------	-------------------	-------------------	-------------------

TABEL 4A: STANDAARD-REDUKSIEPOTENSIALE

Increasing oxidising ability/Toenemende oksiderende vermoë

Half-reactions/Halfreaksies	E^{θ} (V)
$F_2(g) + 2e^- \rightleftharpoons 2F^-$	+ 2,87
$Co^{3+} + e^- \rightleftharpoons Co^{2+}$	+ 1,81
$H_2O_2 + 2H^+ + 2e^- \rightleftharpoons 2H_2O$	+1,77
$MnO_4^- + 8H^+ + 5e^- \rightleftharpoons Mn^{2+} + 4H_2O$	+ 1,51
$Cl_2(g) + 2e^- \rightleftharpoons 2Cl^-$	+ 1,36
$Cr_2O_7^{2-} + 14H^+ + 6e^- \rightleftharpoons 2Cr^{3+} + 7H_2O$	+ 1,33
$O_2(g) + 4H^+ + 4e^- \rightleftharpoons 2H_2O$	+ 1,23
$MnO_2 + 4H^+ + 2e^- \rightleftharpoons Mn^{2+} + 2H_2O$	+ 1,23
$Pt^{2+} + 2e^- \rightleftharpoons Pt$	+ 1,20
$Br_2(l) + 2e^- \rightleftharpoons 2Br^-$	+ 1,07
$NO_3^- + 4H^+ + 3e^- \rightleftharpoons NO(g) + 2H_2O$	+ 0,96
$Hg^{2+} + 2e^- \rightleftharpoons Hg(l)$	+ 0,85
$Ag^+ + e^- \rightleftharpoons Ag$	+ 0,80
$NO_3^- + 2H^+ + e^- \rightleftharpoons NO_2(g) + H_2O$	+ 0,80
$Fe^{3+} + e^- \rightleftharpoons Fe^{2+}$	+ 0,77
$O_2(g) + 2H^+ + 2e^- \rightleftharpoons H_2O_2$	+ 0,68
$I_2 + 2e^- \rightleftharpoons 2I^-$	+ 0,54
$Cu^+ + e^- \rightleftharpoons Cu$	+ 0,52
$SO_2 + 4H^+ + 4e^- \rightleftharpoons S + 2H_2O$	+ 0,45
$2H_2O + O_2 + 4e^- \rightleftharpoons 4OH^-$	+ 0,40
$Cu^{2+} + 2e^- \rightleftharpoons Cu$	+ 0,34
$SO_4^{2-} + 4H^+ + 2e^- \rightleftharpoons SO_2(g) + 2H_2O$	+ 0,17
$Cu^{2+} + e^- \rightleftharpoons Cu^+$	+ 0,16
$Sn^{4+} + 2e^- \rightleftharpoons Sn^{2+}$	+ 0,15
$S + 2H^+ + 2e^- \rightleftharpoons H_2S(g)$	+ 0,14
$2H^+ + 2e^- \rightleftharpoons H_2(g)$	0,00
$Fe^{3+} + 3e^- \rightleftharpoons Fe$	- 0,06
$Pb^{2+} + 2e^- \rightleftharpoons Pb$	- 0,13
$Sn^{2+} + 2e^- \rightleftharpoons Sn$	- 0,14
$Ni^{2+} + 2e^- \rightleftharpoons Ni$	- 0,27
$Co^{2+} + 2e^- \rightleftharpoons Co$	- 0,28
$Cd^{2+} + 2e^- \rightleftharpoons Cd$	- 0,40
$Cr^{3+} + e^- \rightleftharpoons Cr^{2+}$	- 0,41
$Fe^{2+} + 2e^- \rightleftharpoons Fe$	- 0,44
$Cr^{3+} + 3e^- \rightleftharpoons Cr$	- 0,74
$Zn^{2+} + 2e^- \rightleftharpoons Zn$	- 0,76
$2H_2O + 2e^- \rightleftharpoons H_2(g) + 2OH^-$	- 0,83
$Cr^{2+} + 2e^- \rightleftharpoons Cr$	- 0,91
$Mn^{2+} + 2e^- \rightleftharpoons Mn$	- 1,18
$Al^{3+} + 3e^- \rightleftharpoons Al$	- 1,66
$Mg^{2+} + 2e^- \rightleftharpoons Mg$	- 2,36
$Na^+ + e^- \rightleftharpoons Na$	- 2,71
$Ca^{2+} + 2e^- \rightleftharpoons Ca$	- 2,87
$Sr^{2+} + 2e^- \rightleftharpoons Sr$	- 2,89
$Ba^{2+} + 2e^- \rightleftharpoons Ba$	- 2,90
$Cs^+ + e^- \rightleftharpoons Cs$	- 2,92
$K^+ + e^- \rightleftharpoons K$	- 2,93
$Li^+ + e^- \rightleftharpoons Li$	- 3,05

Increasing reducing ability/Toenemende reduserende vermoë

Increasing oxidising ability/Toenemende oksiderende vermoë

Half-reactions/Halbreaksies	E° (V)
$\text{Li}^{+} + \text{e}^{-} \rightleftharpoons \text{Li}$	-3,05
$\text{K}^{+} + \text{e}^{-} \rightleftharpoons \text{K}$	-2,93
$\text{Cs}^{+} + \text{e}^{-} \rightleftharpoons \text{Cs}$	-2,92
$\text{Ba}^{2+} + 2\text{e}^{-} \rightleftharpoons \text{Ba}$	-2,90
$\text{Sr}^{2+} + 2\text{e}^{-} \rightleftharpoons \text{Sr}$	-2,89
$\text{Ca}^{2+} + 2\text{e}^{-} \rightleftharpoons \text{Ca}$	-2,87
$\text{Na}^{+} + \text{e}^{-} \rightleftharpoons \text{Na}$	-2,71
$\text{Mg}^{2+} + 2\text{e}^{-} \rightleftharpoons \text{Mg}$	-2,36
$\text{Al}^{3+} + 3\text{e}^{-} \rightleftharpoons \text{Al}$	-1,66
$\text{Mn}^{2+} + 2\text{e}^{-} \rightleftharpoons \text{Mn}$	-1,18
$\text{Cr}^{3+} + 3\text{e}^{-} \rightleftharpoons \text{Cr}$	-0,91
$2\text{H}_2\text{O} + 2\text{e}^{-} \rightleftharpoons \text{H}_2(\text{g}) + 2\text{OH}^{-}$	-0,83
$\text{Zn}^{2+} + 2\text{e}^{-} \rightleftharpoons \text{Zn}$	-0,76
$\text{Cr}^{3+} + \text{e}^{-} \rightleftharpoons \text{Cr}^{2+}$	-0,74
$\text{Fe}^{3+} + \text{e}^{-} \rightleftharpoons \text{Fe}^{2+}$	-0,44
$\text{Cr}^{3+} + 3\text{e}^{-} \rightleftharpoons \text{Cr}$	-0,41
$\text{Cd}^{2+} + 2\text{e}^{-} \rightleftharpoons \text{Cd}$	-0,40
$\text{Co}^{2+} + 2\text{e}^{-} \rightleftharpoons \text{Co}$	-0,28
$\text{Ni}^{2+} + 2\text{e}^{-} \rightleftharpoons \text{Ni}$	-0,27
$\text{Sn}^{2+} + 2\text{e}^{-} \rightleftharpoons \text{Sn}$	-0,14
$\text{Pb}^{2+} + 2\text{e}^{-} \rightleftharpoons \text{Pb}$	-0,13
$\text{Fe}^{3+} + 3\text{e}^{-} \rightleftharpoons \text{Fe}$	-0,06
$2\text{H}^{+} + 2\text{e}^{-} \rightleftharpoons \text{H}_2(\text{g})$	0,00
$\text{H}_2\text{S}(\text{g}) + 2\text{e}^{-} \rightleftharpoons \text{S} + 2\text{H}^{+} + 2\text{e}^{-}$	+0,14
$\text{Sn}^{4+} + 2\text{e}^{-} \rightleftharpoons \text{Sn}^{2+}$	+0,15
$\text{Cu}^{2+} + \text{e}^{-} \rightleftharpoons \text{Cu}^{+}$	+0,16
$\text{SO}_4^{2-} + 4\text{H}^{+} + 2\text{e}^{-} \rightleftharpoons \text{SO}_2(\text{g}) + 2\text{H}_2\text{O}$	+0,17
$\text{Cu}^{2+} + 2\text{e}^{-} \rightleftharpoons \text{Cu}$	+0,34
$2\text{H}_2\text{O} + \text{O}_2 + 4\text{e}^{-} \rightleftharpoons 4\text{OH}^{-}$	+0,40
$\text{SO}_2 + 4\text{H}^{+} + 4\text{e}^{-} \rightleftharpoons \text{S} + 2\text{H}_2\text{O}$	+0,45
$\text{Cu}^{+} + \text{e}^{-} \rightleftharpoons \text{Cu}$	+0,52
$\text{I}_2 + 2\text{e}^{-} \rightleftharpoons 2\text{I}^{-}$	+0,54
$\text{O}_2(\text{g}) + 2\text{H}^{+} + 2\text{e}^{-} \rightleftharpoons \text{H}_2\text{O}_2$	+0,68
$\text{Fe}^{3+} + \text{e}^{-} \rightleftharpoons \text{Fe}^{2+}$	+0,77
$\text{NO}_3^{-} + 2\text{H}^{+} + \text{e}^{-} \rightleftharpoons \text{NO}_2(\text{g}) + \text{H}_2\text{O}$	+0,80
$\text{Ag}^{+} + \text{e}^{-} \rightleftharpoons \text{Ag}$	+0,80
$\text{Hg}_2^{2+} + 2\text{e}^{-} \rightleftharpoons 2\text{Hg}(\text{l})$	+0,85
$\text{NO}_3^{-} + 4\text{H}^{+} + 3\text{e}^{-} \rightleftharpoons \text{NO}(\text{g}) + 2\text{H}_2\text{O}$	+0,96
$\text{Br}_2(\text{l}) + 2\text{e}^{-} \rightleftharpoons 2\text{Br}^{-}$	+1,07
$\text{Pt}^{2+} + 2\text{e}^{-} \rightleftharpoons \text{Pt}$	+1,20
$\text{MnO}_2 + 4\text{H}^{+} + 2\text{e}^{-} \rightleftharpoons \text{Mn}^{2+} + 2\text{H}_2\text{O}$	+1,23
$\text{O}_2(\text{g}) + 4\text{H}^{+} + 4\text{e}^{-} \rightleftharpoons 2\text{H}_2\text{O}$	+1,23
$\text{Cr}_2\text{O}_7^{2-} + 14\text{H}^{+} + 6\text{e}^{-} \rightleftharpoons 2\text{Cr}^{3+} + 7\text{H}_2\text{O}$	+1,33
$\text{Ce}_2(\text{g}) + 2\text{e}^{-} \rightleftharpoons 2\text{Ce}^{-}$	+1,36
$\text{MnO}_4^{-} + 8\text{H}^{+} + 5\text{e}^{-} \rightleftharpoons \text{Mn}^{2+} + 4\text{H}_2\text{O}$	+1,51
$\text{H}_2\text{O}_2 + 2\text{H}^{+} + 2\text{e}^{-} \rightleftharpoons 2\text{H}_2\text{O}$	+1,77
$\text{Co}^{3+} + \text{e}^{-} \rightleftharpoons \text{Co}^{2+}$	+1,81
$\text{F}_2(\text{g}) + 2\text{e}^{-} \rightleftharpoons 2\text{F}^{-}$	+2,87

Increasing reducing ability/Toenemende reduserende vermoë

TABLE 4B: STANDARD REDUCTION POTENTIALS
TABEL 4B: STANDAARD-REDUKSIEPOTENSIALE