

SA's Leading Past Year

Exam Paper Portal



You have Downloaded, yet Another Great Resource to assist you with your Studies 😊

Thank You for Supporting SA Exam Papers

Your Leading Past Year Exam Paper Resource Portal

Visit us @ www.saexampapers.co.za





basic education

Department:
Basic Education
REPUBLIC OF SOUTH AFRICA

SENIOR CERTIFICATE EXAMINATIONS/ NATIONAL SENIOR CERTIFICATE EXAMINATIONS

ENGINEERING GRAPHICS AND DESIGN P2

MAY/JUNE 2024

MARKS: 100

TIME: 3 hours

This question paper consists of 6 pages.

Barcode label

DO NOT FOLD THE QUESTION PAPER IN HALF.

Confidential

INSTRUCTIONS AND INFORMATION

1. This question paper consists of FOUR questions.
2. Answer ALL the questions.
3. ALL drawings are in third-angle orthographic projection, unless otherwise stated.
4. ALL drawings must be prepared using pencil and instruments, unless otherwise stated.
5. ALL answers must be drawn accurately and neatly.
6. ALL the questions must be answered on the QUESTION PAPER, as instructed.
7. ALL the pages, irrespective of whether the question was attempted or not, must be re-stapled in numerical sequence in the TOP LEFT-HAND CORNER ONLY.
8. Time management is essential in order to complete all the questions.
9. Print your examination number in the block provided on every page.
10. Any details or dimensions not given must be assumed in good proportion.

FOR OFFICIAL USE ONLY											
QUESTION	MARKS OBTAINED	$\frac{1}{2}$	SIGN	MODERATED	$\frac{1}{2}$	SIGN	RE-MARKING	$\frac{1}{2}$	SIGN		
1											
2											
3											
4											
TOTAL											
	2	0	0		2	0	0		2	0	0

FINAL CONVERTED MARK

100

CHECKED BY

COMPLETE THE FOLLOWING:

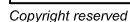
CENTRE NUMBER

CENTRE NUMBER

EXAMINATION NUMBER

EXAMINATION NUMBER





Please turn over



P +

QUESTION 2: LOCI (CAM)

Given:

- The detail of a camshaft and a wedge-shaped follower at the minimum distance from the camshaft centre
- The position of centre point P on the drawing sheet

Specifications:

- The wedge-shaped follower reciprocates along a 60° line that passes through the centre of the camshaft.
- The **minimum** distance from the follower to the centre of the camshaft = 20 mm
- Rotation = anti-clockwise

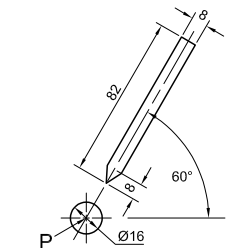
Motion:

The cam imparts the following motion to the wedge-shaped follower:

- It rises 40 mm over the first 60° with uniform motion.
- There is a dwell period for the next 30°.
- It rises to its maximum displacement of 80 mm over the next 90° with uniform motion.
- It descends 40 mm over the next 90° with simple harmonic motion.
- It returns to its original position with uniform acceleration and retardation over the remainder of the rotation.

Instructions:

- Using centre point P on the drawing sheet, draw, to scale 1 : 1, the camshaft and wedge-shaped follower in the given position.
- Draw to a rotational scale of 30° = 8 mm and a displacement scale of 1 : 1, the complete displacement graph for the required motion.
- Using the given position of the follower as 0°, project and draw the cam profile from the displacement graph.
- Indicate the direction of rotation on the cam profile with an arrow.
- Indicate the rotational scale of the graph.
- Show ALL construction and projection. [37]



WEDGE-SHAPED FOLLOWER
AND CAMSHAFT DETAIL

ASSESSMENT CRITERIA

1	GIVEN + MINIMUM DISTANCE + CL	5			
2	GRAPH CONSTRUCTION	7			
3	PLOTTING GRAPH + GRAPH CURVES	9			
4	CAM CONSTRUCTION	5			
5	PLOTTING + CAM PROFILE	11			
PENALTIES (-)					
TOTAL		37			
EXAMINATION NUMBER					
EXAMINATION NUMBER					
					3





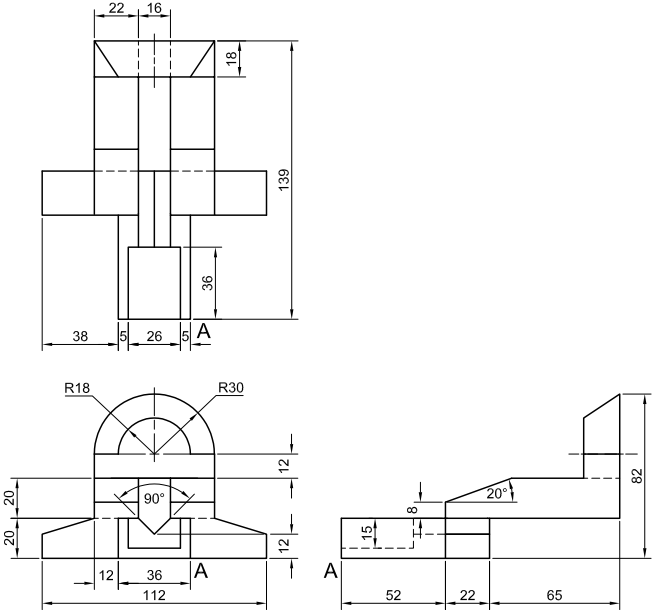
QUESTION 3: ISOMETRIC DRAWING

- Given:**
- The front view, top view and right view of a casting
 - The position of point A on the drawing sheet

Instructions:
Using scale 1 : 1, convert the orthographic views of the casting into an isometric drawing.

- Use A as the starting and lowest point of the drawing.
- Show ALL construction.
- NO hidden detail is required.

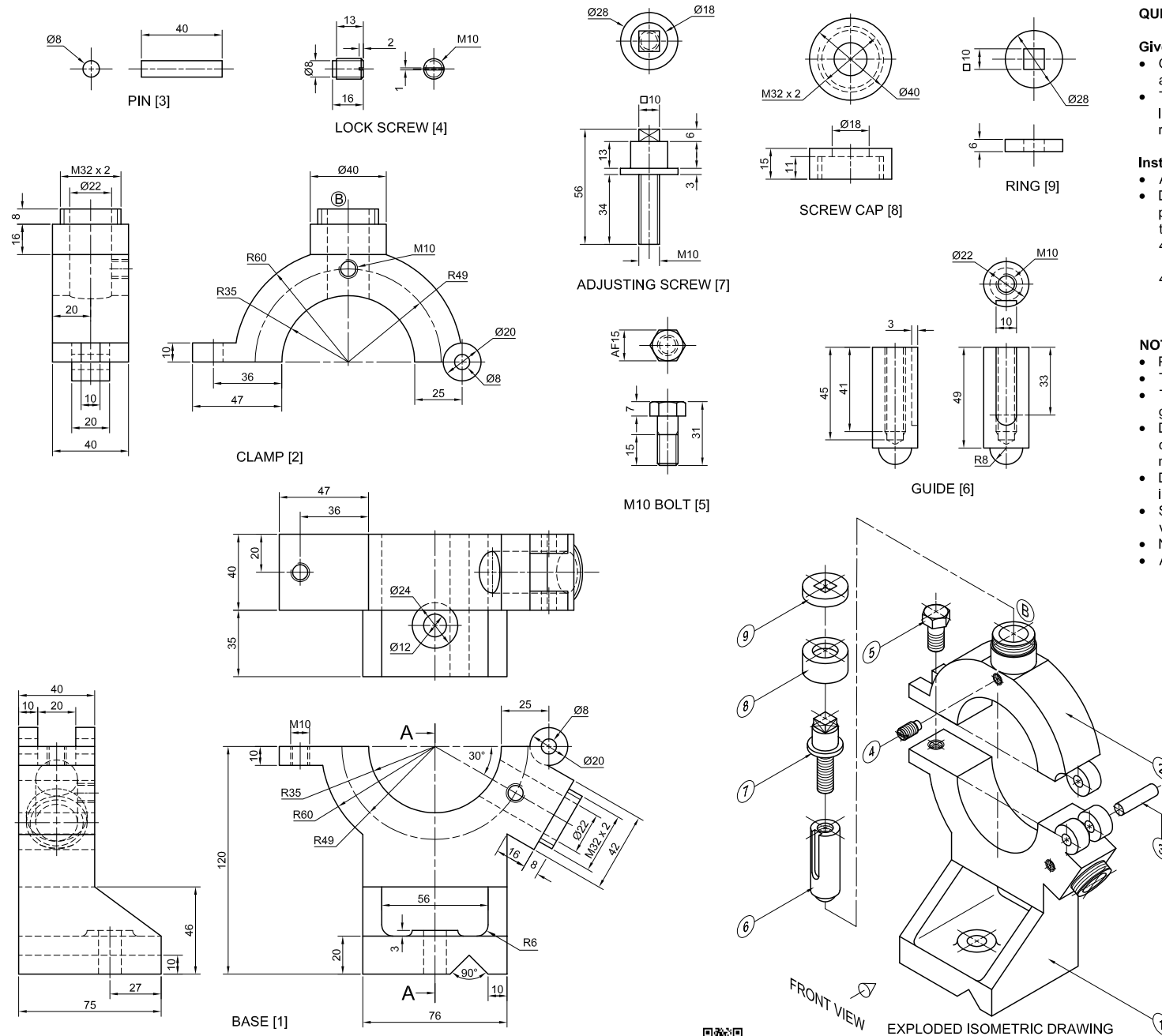
[40]



↓
A

ASSESSMENT CRITERIA					
1	PLACING + AUX. VIEW	2			
2	FRONT PORTION	12 1/2			
3	UPPER PORTION	18 1/2			
4	ARCS + CONSTR. + CL	7			
PENALTIES (-)					
TOTAL		40			
EXAMINATION NUMBER					
EXAMINATION NUMBER					4



**QUESTION 4: MECHANICAL ASSEMBLY****Given:**

- Orthographic views of each part of the fixed lathe steady assembly
- The exploded isometric drawing of the parts of a fixed lathe steady assembly, showing the position of each part relative to all the others

Instructions:

- Answer this question on page 6.
- Draw, to scale 1 : 1 and in third-angle orthographic projection, the following views of the assembled parts of the fixed lathe steady assembly:
 - 1 The **front view** as seen from the direction of the arrow on the exploded isometric drawing.
 - 2 A **sectional left view** on cutting plane A-A. The cutting plane is shown on the front view of the base (part 1).

NOTE:

- Planning is essential.
- The convention of symmetry may NOT be applied.
- The drawing must comply with the SANS 10111 guidelines.
- Draw the guide (part 6), adjusting screw (part 7), screw cap (part 8) and the ring (part 9) only in the top hole marked B.
- Draw only the top lock screw (part 4) in position, as shown in the exploded isometric drawing.
- Show THREE faces of the M10 bolt (part 5) in the front view.
- NO hidden detail is required.
- Add cutting plane A-A.

[93]

PARTS LIST			
PARTS		QUANTITY	MATERIAL
1	BASE	1	CAST IRON
2	CLAMP	1	CAST IRON
3	PIN	1	STEEL
4	LOCK SCREW	1	STEEL
5	M10 BOLT	1	STEEL
6	GUIDE	1	BRASS
7	ADJUSTING SCREW	1	STEEL
8	SCREW CAP	1	BRASS
9	RING	1	ALUMINIUM

<u>GUIDANCE</u>		7 XANDER STREET DE JAGER	
ENGINEERING CC		www.guidance.co.za	
		☎ 012 345 6789	
FIXED STEADY ASSEMBLY			
ALL DIMENSIONS ARE IN MILLIMETRES.			

5



FOR OFFICIAL USE ONLY	
INCORRECT ORTHOGRAPHIC PROJECTION	
INCORRECT OVERALL SCALE	
INCORRECT HATCHING	
PARTS NOT ASSEMBLED	
TOTAL PENALTIES (-)	

ASSESSMENT CRITERIA					
FRONT VIEW					
		POSSIBLE	OBTAINED	SIGN	MODERATED
1	BASE	15			
2	CLAMP + PIN	5			
3	SCREW CAP + RING	3			
4	GUIDE	1			
5	LOCK SCREW	2 $\frac{1}{2}$			
6	M10 BOLT	6			
7	ADJUSTING SCREW	1			
SUBTOTAL		33 $\frac{1}{2}$			
SECTIONAL LEFT VIEW					
1	BASE	12			
2	CLAMP	7			
3	GUIDE	8 $\frac{1}{2}$			
4	ADJUSTING SCREW	6 $\frac{1}{2}$			
5	RING	3			
6	LOCK SCREW	4 $\frac{1}{2}$			
7	SCREW CAP	3			
SUBTOTAL		44 $\frac{1}{2}$			
GENERAL					
1	CENTRE LINES	4			
2	ASSEMBLY	8			
3	CUTTING PLANE A-A	3			
SUBTOTAL		15			
TOTAL		93			
PENALTIES (-)					
GRAND TOTAL					
EXAMINATION NUMBER					
					6

